



साथ रहेंगे Success तक

IIT-JEE | NEET | NDA



CLASS
7

OLYMPIAD EXAM 2024-25

CLASS 7th OLYMPIAD EXAM | APRIL MONTHS

Total Questions : 50

Time : 60 Minutes

Name :

Class : Section :

SECTION-I (ENGLISH)

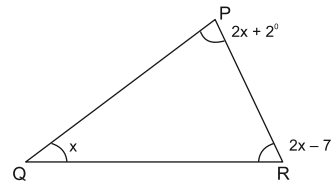
Select the suitable option of the given four options to fill in the blanks :

- Beauty _____ no ornaments.
(a) need (b) needs (c) is needing (d) has needed
- Run fast lest you _____ miss the train.
(a) can (b) could (c) may (d) should
- Kalidas is _____ shakespeare of India.
(a) an (b) a (c) the (d) none
- There _____ plenty of time before the bus leaves.
(a) are (b) were (c) was (d) is
- Please let me _____ my work.
(a) do (b) to do (c) doing (d) done
- He lives _____ London in England.
(a) at (b) into (c) in (d) on
- _____ you work hard, you will not pass.
(a) until (b) since (c) because (d) unless
- _____ student is absent today.
(a) much (b) many (c) many a (d) none
- I was told so by the teacher _____.
(a) ourselves (b) himself (c) myself (d) itself
- The _____ train of the day has been cancelled.
(a) later (b) latter (c) latest (d) last

SECTION-II (MATHEMATICS)

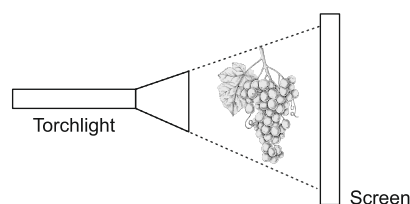
- By what number should $-33/8$ be divided to get $11/2$?
(a) $3/4$ (b) $-3/4$ (c) $4/3$ (d) $-4/3$
- Find the simplified expression of : $7x^2 - [x^2 - 3x - \{x + y\}] - (5x - 3y + 3)$
(a) $6x^2 - 2x + 4y + 3$ (b) $6x^2 - 2x - 4y - 3$ (c) $6x^2 - 2x + 4y - 3$ (d) None of these

3. $0.4 \div 0.4 \div 0.4 = ?$
 (a) 0.25 (b) 2.5 (c) 0.025 (d) None of these
4. What is the median of first 9 multiple of 12?
 (a) 36 (b) 60 (c) 48 (d) 72
5. The additive inverse of $\left(\frac{25}{4} \times \frac{2}{5}\right) - \left(\frac{-1}{5} \times \frac{-10}{3}\right)$:
 (a) $1\frac{5}{6}$ (b) $\frac{6}{11}$ (c) $-1\frac{5}{6}$ (d) $\frac{-6}{11}$
6. If $\frac{3^{2x-6}}{225} = \frac{5^2}{5^x}$, then value of 'x' will be :
 (a) 4 (b) 2 (c) 5 (d) None of these
7. Study the statement given below carefully :
 (i) The successor of $0 \times (-52)$ is $1 \times (-52)$.
 (ii) Integer are closed under division.
 (iii) $(-20) \times (5 - 3) = (-20) \times (-2)$
 (iv) $(-2) + (-9)$ is less than $(-9) - (-2)$
 Which of the following is correct?
 (a) Only (i) (b) Both (i) and (iv) (c) Only (iv) (d) Both (i) and (iii)
8. A committee buys 43.7kg of wheat at ₹ 12 per kg and distribute among 152 people. What is the amount of money spent for each person?
 (a) ₹ 3.75 (b) ₹ 24.4 (c) ₹ 3.45 (d) ₹ 4.35
9. Solve for x : $3(2x - 1) + 25\%$ of $x = 97$
 (a) 20 (b) 24 (c) 12 (d) 16
10. The value of x in the adjoining figure is :
 (a) 76°
 (b) 67°
 (c) 113°
 (d) 37°



SECTION-III (SCIENCE)

1. In cockroaches, air enters the body through :
 (a) lungs (b) gills (c) spiracles (d) skin
2. Anu shone torchlight at a bunch of grapes as shown here. What can Anu do to enlarge the Torchlight shadow of the bunch of Screen grapes on the screen?



- (i) Shift the grapes nearer to the torchlight
- (ii) Shift the screen away from the grapes.
- (iii) Shift the screen closer to the grapes.
- (iv) Shift the torchlight further away from the grapes.
- (a) (i) and (iii) only (b) (i) and (ii) only (c) (iii) and (iv) only (d) (ii) and (iv) only

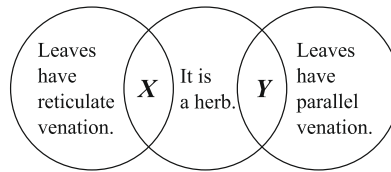
3. Raju used a magnet to attract an iron nail. Then he observed that more nails could be attracted in a manner as shown here. N represents North Pole of magnet.



Which of the following statements about the iron nails is correct?

- (a) P and S are the north poles (b) Q will repel T.
- (c) S and U will attract each other. (d) R and T are like poles.

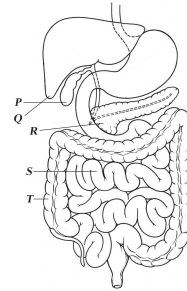
4. Refer to the given Venn diagram and select the correct option regarding X and Y.



- | | | | |
|---------------|----------|-----------|----------|
| X | Y | X | Y |
| (a) Aloe | Mint | (c) Basil | Mustard |
| (b) Coriander | Maize | (d) Palm | Bamboo |

5. Refer to the given diagram of human digestive system and select the correct option regarding its labelled parts P, Q, R, S and T.

- (a) R secretes digestive enzymes viz, amylase, lipase, pepsin, trypsin, etc.
- (b) P secretes bile juice whereas T secretes hydrochloric acid.
- (c) S is longer in herbivores as compared to carnivores to aid the digestion of cellulose rich food.
- (d) Q is the largest digestive gland which secretes different enzymes for digestion of fats, proteins and carbohydrates.



6. The given figure shows the cross sections of two blood vessels X and Y found in humans. Identify them and select the incorrect option regarding them.

- (a) X always carries oxygen rich blood away from the heart whereas Y always carries carbon dioxide rich blood towards the heart.
- (b) Y is provided with valves to prevent the back flow of blood whereas valves are absent in X.
- (c) X is usually deep seated whereas Y is superficially placed.
- (d) Pressure of blood is much higher in X as compared to Y.



7. The acid secreted by stomach is :

- (a) HCl (b) H₂Cl (c) KCl (d) K₂Cl

8. The strongest and longest human bone :

- (a) upper arm bone (b) shoulder bone (c) thigh bone (d) none of these

9. When the switch is in the _____ position, the circuit is complete.

- (a) off (b) on (c) half on (d) none of the above

10. During exhalation, the ribs :

- (a) move outwards (b) move downwards (c) move upwards (d) do not move at all

SECTION-IV (SOCIAL STUDIES)

- The first Mughal Emperor in India was _____ :
 (a) Babar (b) Shah Jahan (c) Akbar (d) Jahangir
- The "Thar desert" where is it spreaded?
 (a) India or Pakistan (b) Only India (c) Only Pakistan (d) None of these
- What's the Tenure of Loksabha in India?
 (a) 5 year (b) 6 year (c) 4 year (d) None of these
- What's the age is required to apply the post of "President of India"?
 (a) ≥ 35 (b) < 35 (c) > 35 (d) = 35
- Which of the following Lattitude line is very bigger than others?
 (a) Equator (b) Tropic of Cancer (c) Tropic of Capricorn (d) None of these
- What's the name of Kerala Coastal Plain is called :
 (a) Malabar (b) Konkan Coast (c) Cannara Coast (d) Kathiawar Coast
- Who was the Initial Guru of Chandergupta Morya-I?
 (a) Chankya (b) Megasthneiz (c) Guru Nanak Dev (d) Kabirdas
- Which of the following is "Rabi Seasonal Crop"?
 (a) Wheat (b) Paddy (c) Cotton (d) Millet
- Magma applied the force in the inner part of the earth is called _____.
 (a) Endogenic force (b) Exogenic force (c) Gravitational force (d) None of these
- "New Parliament House of India" is situated in which of the following Mega City?
 (a) New Delhi (b) Chennai (c) Kolkata (d) Mumbai

SECTION-V (REASONING)

- 1, 6, 15, ?, 45, 66, 91
 (a) 25 (b) 26 (c) 27 (d) 28
- LANGOUR : RZMTLFL : : CERTAIN : _____ ?
 (a) NVIGZRC (b) NIVGZRC (c) NVIGZR (d) NVIZGRC
- What will be proper order?
1. Trillion 2. Million 3. Thousand 4. Billion 5. Hundred
 (a) 5 3 2 4 1 (b) 5 3 2 1 4 (c) 4 5 3 2 1 (d) 1 2 3 4 5
- If 'x' denotes '-', '+' denotes '-', '-' denotes '+' and '-' denotes '+' and '-' denotes 'x' then what is the value of :
 $136 + 4 - 5 - 68 \times 75$
 (a) 165 (b) 146 (c) 173 (d) 163
- Mill : Cloth : : Factory : ?
 (a) Fibre (b) Textile (c) Cement (d) Oil
- Swarm : Bee : : Flock : ?
 (a) Cattle (b) Man (c) Sheep (d) Fish
- 2, 4, 8, 16, _____, _____
 (a) 32, 64 (b) 64, 32 (c) 32, 48 (d) 48, 23
- 2, 6, 12, 20, _____
 (a) 30 (b) 32 (c) 28 (d) 40
- 7, 26, 63, 124, _____
 (a) 210 (b) 216 (c) 215 (d) 224
- MANS : HMZN : : HALK : _____ ?
 (a) SZOP (b) ZSPO (c) POZS (d) POSZ