



**LORD
KRISHNA**

Affiliated to CBSE
**PUBLIC
SCHOOL**
Affiliation No. 530600

ASSIGNMENT WORK

Class 7TH

Subject : ENGLISH

CHAPTER – 1:- A TIGER IN THE HOUSE

Q.1 Where did the tiger – cub was discovered?

Q.2 Where did Timothy was hiding?

Q.3 Who brought home Timothy the tiger- cub?

Q.4 How did the tiger- cub drink milk?

Q.5 Who were the companions of Timothy?

Q.6 In which zoo Timothy was transferred?

Q.7 Who named the tiger- cub ‘Timothy’?

Q.8 Who was Mahmoud?

Q.9 What was Timothy’s diet before raw mutton and cod-liver oil?

Q.10 Who was Toto?

Q.11 Grandfather discovered Timothy-

- a. in the cotton field**
- b. in the jungle near Lucknow.**
- c. in the Terai jungle near Dehra.**
- d. in the mango orchard.**

Q.12 Grandfather named the tiger – cub:-

- a. Toto**
- b. Titothy**
- c. Mitothy**
- d. Timothy**

Q.13 Toto pulled the young tiger by the-

- a. ear**
- b. nose**
- c. tail**
- d. all of these**

Q.14 Where did Timothy sleep at night?

- a. in the bedroom
- b. in the drawing room
- c. in the kitchen
- d. in the cook's quarter

Q.15 'We are going to find Timothy sitting on Mahmoud's bed and no sign of the cook except his cloths and shoes.' Who said these words?

- a. Author
- b. Grandfather
- c. Grandmother
- d. Mahmaud.

Q.16 Who is the writer of the chapter 'A tiger in the House'?

CHAPTER – 2 BEFORE THE EXAMINATION

Q.17 What did Swaminathan realize two weeks before the examinations?

Q.18 Who made the maps of India. Africa and Europe?

Q.19 Who was sleeping in the swing- cradle?

- a. Rajam's little brother
- b. Mani's little sister
- c. Swami's little brother
- d. Rajam's little sister

Q.20 Why did Mani take a packet of brinjal to the school clerk's house?

- a. to sell the brinjals
- b. to know about the answers
- c. to know about the question papers
- d. none of these

Q.21 According to the students, who know about the question papers?

- a. school's peon
- b. school's principal
- c. school's clerk
- d. school's teacher

Q.22 'I am much worried about my examination's. Who said these words to whom?

- a. Swami said to the clerk
- b. Mani said to the clerk
- c. Rajam said to clerk
- d. Swami said to his father.

POEM - DAFFODILS

Q.23 Who wandered as a cloud?

- a. The daffodils
- b. the poet
- c. both a and b
- d. none of these

Q.24 Who does float over the valleys and hills?

- a. cloud
- b. daffodils
- c. the poet
- d. all of these

Q.25 Who danced beside the waves?

- a. the daffodils
- b. the poet
- c. the clouds
- d. none of these

Q.26 Where did the poet often lie?

- a. on the sand
- b. on the couch
- c. in the bed
- d. none

Q.27 The daffodil are compared with:-

- a. clouds
- b. the waves
- c. both a and b
- d. none of these

Q.28 Who is the poet of the poem ‘ Daffodils ’?

Q.29 Pick out the nouns from the following sentences and write their kinds.

- i. Employment is needed by every young person.
- ii. Disregard of nature is bringing destruction.
- iii. Mumbai is the business capital of India.
- iv. A herd of cattle was seen grazing the grass.
- v. I was a good dancer in my youth.

Q.30 Identify the sentences and write their types.

- a. Alas! He is no more.
- b. The sum of three angles of a triangle is 180° .
- c. Did you attend the class yesterday?
- d. What a lazy girl you are!
- e. Always speak the truth.

f. What are you doing?

g. How beautiful picture is this!

Q.31 Fill in the blanks with correct form of verb.

1. India is _____ sugar to Pakistan. (export)
2. My friend _____ at Mohan Nagar and I _____ at Patel Nagar. (live)
3. He has _____ already taken lunch. (take)
4. What have you _____ since noon? (do)
5. He _____ T.V. for last half an hour. (watch)

Q.32 Fill in the blanks with suitable articles. (if necessary)

1. _____ gold of America is very costly.
a. A b. An c. The d. X
2. I take _____ dinner at 9:00 pm.
a. X b. A c. The d. An
3. _____ dinner given by Mrs. Gupta was very delicious.
a. A b. The c. An d. X
4. He is _____ expert in computer languages.
a. The b. A c. An d. X
5. Today I got _____ birthday gift and _____ X-mas present.
a. An, A b. An, The c. The, A d. A, An
6. _____ Hockey is our national game.
a. A b. The c. X d. An
7. _____ January is _____ first month of the year.
a. The, The b. X, The c. A, The d. X, X
8. He is _____ B.A while his brother is _____ M.A.
a. An, An b. A, An c. X, An d. X, X

SCIENCE ASSIGNMENT

CLASS- 7

Q.1 Why do organism take food?

Q.2 How would you test the presence of starch in leaves?

Q.3 Give a brief description of the process of synthesis of food in green plants.

Q.4 What is symbiosis?

Q.5 What is photosynthesis?

Q.6 State similarities and difference between the laboratory thermometer and the clinical thermometer.

Q.7 Give two example each of conductors and insulators of heat.

Q.8 Define convection?

Q.9 What is radiation?

Q.10 Explain with diagrams how are convection currents set up in nature (land and sea breeze).

Q.11 Explain the conduction of heat in solid with an activity.

Q.12 How is heat transmitted in a liquid medium? Explain with an activity.

Q.13 Bird puff up their feathers in winters Explain.

Q.14 We wear loose light coloured clothes in summer Why.

Q.15 We wear dark coloured clothes in winter Explain.

Q.16 Mud houses with thatched roofs are cool in summer explain.

Q.17 Mercury is used in thermometer why?

ASSIGNMENT - S.S.T

CLASS- 7

Q.1 Who used to collect manuscripts in the past?

- a. monasteries b. temple c. ruler d. none of these

Q.2 Who is cartographer?

- a. A person who make painting. b. A person who make maps.
c. A person who make sketch d. none of these

Q.3 Who was A L –Jdrisi?

- a. cartographer b. choreographer
c. both a and b d. none of these

Q.4 When was the last battle of terrain fought?

- a. 1192 b. 1191 c. 1193 d. 1190

Q.5 Who was Dantidurga?

- a. Rashtrakuta chief b. Chola chief
c. Chalukyas chief d. none of these

Q.6 Name the book written by A I – Baruni

Q.7 What were known as ur?

Q.8 What was the tripartite struggle?

Q.9 What was the role of temples during the chola kingdom?

Q.10 How did the position of the peasants change?

Q.11 What was Jati based on?

Q.12 When did the Mughal empire decline?

Q.13 Describe the king who were involved in warfare of wealth.

Q.14 Who build Gangalkoda cholapuram.

Q.15 What was the role of temple during the chole Kingdom.

Q.16 Book read and write words used to describe India.

REASONING ASSIGNMENT

CLASS 7

CHAPIER- 1 Series completion and inserting

Choose the correct option from the given ones that will complete the series.

Q1. 1, 6, 15, ? , 45, 66, 91.

- a. 25 b. 26 c. 27 d. 28

Q.2 2, 5, 9, 19, 37, ? .

- a. 73 b. 75 c. 76 d. 78

Q.3 4, 8, 28, 80, 244, ? .

- a. 278 b. 428 c. 628 d. 728

Q.4 10000, 11000, 9900, 10890, 9801, ? .

- a. 10241 b. 10423 c. 10781 d. 10929

Q.5 0, 6, 24, 60, 120, 210, ? .

- a. 240 b. 290 c. 336 d. 504

Find out the wrong term.

Q.6 196, 169, 144, 121, 101.

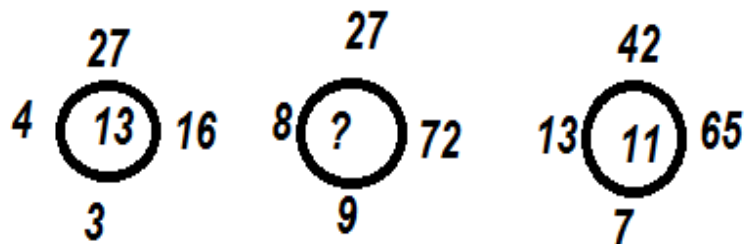
- a. 101 b. 121 c. 169 d. 196

Q.7 3, 10, 27, 4, 16, 64, 5, 25, 125.

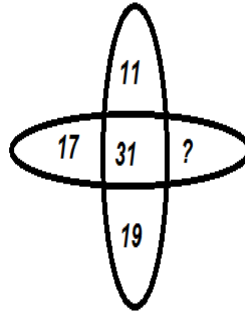
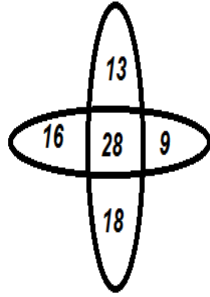
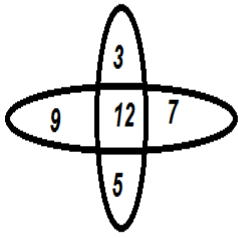
- a. 3 b. 4 c. 169 d. 10

Q.8 Find the missing number.

- a. 18
b. 9
c. 15
d. 12

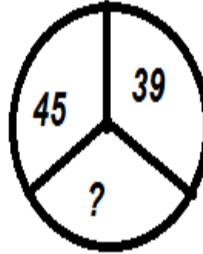
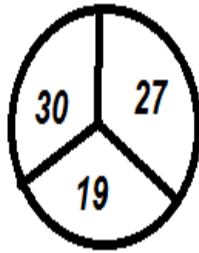
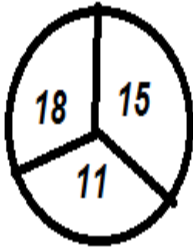


Q.9



- a. 14
- b. 13
- c. 15
- d. 18

Q.10



- a. 42
- b. 18
- c. 48
- d. 56

CHAPTER – 2 ANALOGY AND CLASSIFICATION

Select the related word/ letters/ number from the given alternatives.

Q.1 Newspaper : Press :: cloth : ?

- | | | | |
|-----------|------------|----------|---------|
| a. tailor | b. textile | c. fibre | d. mill |
|-----------|------------|----------|---------|

Q.2 21 : 3 :: 574 : ?

- | | | | |
|-------|-------|-------|--------|
| a. 23 | b. 82 | c. 97 | d. 113 |
|-------|-------|-------|--------|

Q.3 18 : 30 :: 36 : ?

- | | | | |
|-------|-------|-------|-------|
| a. 54 | b. 62 | c. 64 | d. 66 |
|-------|-------|-------|-------|

Q.4 3 : 243 :: 5 : ?

- | | | | |
|--------|--------|--------|---------|
| a. 425 | b. 465 | c. 546 | d. 3125 |
|--------|--------|--------|---------|

Q.5 20 : 11 :: 102 : ?

- | | | | |
|-------|-------|-------|-------|
| a. 49 | b. 52 | c. 61 | d. 98 |
|-------|-------|-------|-------|

Q.6 AG : IO :: EK : ?

- | | | | |
|-------|-------|-------|-------|
| a. LR | b. MS | c. PV | d. SY |
|-------|-------|-------|-------|

Q.7 M A D : J X A :: R U N : ?

a. O R K

b. O S Q

c. P R J

d. U X Q

Find odd one out.

Q.8 a. Parrot

b. Bat

c. Crow

d. Sparrow

Q.9 a. 13

b. 17

c. 23

d. 63

e. 71

Q.10 a. BCDE

b. PQRS

c. WXYZ

d. STUW

e. GHIJ

MATHS – ASSIGNMENT

CHAPTER- 1:- INTEGER

- Q.1** The maximum temperature of a city on a particular day was 18°C , while the minimum temperature recorded on the same day was 3°C . What is the difference in two temperature?
- Q.2** Sum of two integers is -30. If one of them is 15 . Find the other integer.
- Q.3** In a quiz , positive marks are given for correct answer and negative marks are given for incorrect answer. If Mala's score in five successive rounds were 50, -25, 10, 15, -10. What was her total score at the end.
- Q.4** If $a = 25$, $b = 3$, which of the following is true?
i. $a - b = b - a$ ii. $a - (-b) = a + b$
- Q.5** A submarine was 3500m below sea level. If it ascends 1200m, What is its new position?
- Q.6** An electrical company earns a profit of Rs 80 on sale of every colour TV and loss of Rs60 on every refrigerator. If the company sells 5000 colour TV and 4000 refrigerators in a month. What is its profit or loss?
- Q.7** A plane is flying at the height of 5000m above the sea level. At a particular point , it is exactly above a submarine floating 1200m below the sea level. What is the vertical distance between them.
- Q.8** Verify the following:-
a) $18 \times [7 + (-3)] = (18 \times 7) + [18 \times (-3)]$
b) $(-21) \times [(-4) + (-6)] = [(-2) \times (-4)] + [(-21) \times (-6)]$
- Q.9** The temperature at 12 noon was 10°C above zero. If it decreases at the rate of 2°C per hour until midnight, at what time would the temperature be 8°C below zero? What would be the temperature at mid night?

Q.10 Verify that $a \div (b + c) \neq (a \div b) + (a \div c)$ per each of the following values of a. b and c.

NTSE BASED QUESTIONS

Q.1 Which of the following is a correct statement?

- a. $-5 > -4$
- b. $-5 < -4$
- c. $-5, -4$ are non comparable
- d. $-5 = -4$

Q.2 The additive inverse of -6 is :-

- a. 6
- b. 0
- c. -5
- d. -7

Q.3 The sum of two integers is 14. If one of them is -8 , then the other is:-

- a. 22
- b. -22
- c. 6
- d. none of these

Q.4 On subtracting -13 from -8 , we get :-

- a. -21
- b. 21
- c. 5
- d. -5

Q.5 The value of $385 \times 99 - (-385)$ is:-

- a. 63698
- b. 38576
- c. 38500
- d. 45600

Q.6 $(27) \times (16) + (27) \times (-14) = ?$

- a. -810
- b. 810
- c. -54
- d. 54

Q.7 What must be subtracted from -3 to get -9 ?

- a. -6
- b. 12
- c. 6
- d. -12

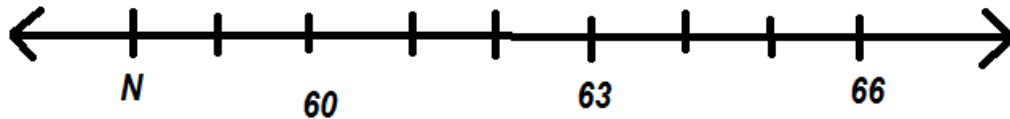
Q.8 The sum of two integers is 93. If one of them is -59 , then the other one is:-

- a. 34
- b. -34
- c. 152
- d. -15

Q.9 Which one of the following pair of integers does not give the sum -7 .

- a. $-5, -2$
- b. $-13, 6$
- c. $8, -15$
- d. $-3, 4$

Q.10 The letter N represents which number?



- a. 58 b. 59 c. 61 d. 62

Q.11 Predecessor of successor of -21 is:-

- a. -20 b. -19 c. -22 d. -21

Q.12 A gardener plans to plant 630 trees in 21 rows each containing the same number of trees , then how many trees will there be in each row.

- a. 300 b. 30 c. 21 d. 3

Q.13 If $a \div (-35) = -5$, then the value of a is:-

- a. -7 b. 7 c. 90 d. 175

Q.14 Temperature of a hill station at a particular time is $+17^{\circ}\text{C}$. It falls down by 3°C every hour. What will be the temperature after 8 hours.

- a. 41°C b. -7°C c. 14°C d. 24°C

Q.15 An integer when divided by -5 gives 45. The integer is:-

- a. -9 b. 50 c. 225 d. -225

Q.16 The difference between the smallest positive integer and the greatest negative integer is:-

- a. 2 b. -2 c. 1 d. -1

Q.17 An integer multiplied by -7 gives 119. Find the integer:-

- a. 17 b. -833 c. -17 d. 833

Q.18 Subtract the sum of -570 and -130 from the sum of -1500 and 1200.

- a. 400 b. -400 c. -740 d. -140

Q.19 What should be subtracted from the product of -13 and -7 to get -120 .

- a. 211 b. -29 c. 110 d. 87

Q.20 The product of three integers is -225 . If two of the integers are -17 and -5 , then the third integer will be:-

a. -85

b. 1

c. 3

d. -3

ASSIGNMENT – 2**CLASS – 7TH****CHAPTER – 2****FRACTION.**

Q.1 What number should be added to $\frac{5}{11}$ to get $\frac{7}{11}$.

Q.2 A piece of wire is of length $8\frac{1}{4}$ m. It is cut into two pieces. The length of one piece is $4\frac{3}{4}$ m. What is the length of the other piece.

Q.3 The sides of a triangle are $\frac{7}{2}$ cm, $\frac{11}{4}$ cm and $\frac{16}{5}$ cm. Find its perimeter.

Q.4 Find:-

i. $\frac{1}{4}$ of a rupee	ii. $\frac{3}{4}$ of a day
iii. $\frac{7}{25}$ of a kg	iv. $\frac{2}{3}$ of an hour.

Q.5 Vineeta reads a book for $1\frac{4}{5}$ hours everyday. She reads the entire book in 10days. How many hours in all were taken by her to read the book?

Q.6 Shikha's age is $\frac{2}{3}$ of the age of her eldest brother. If her brother's age is 35 years, then how old is Sikha?

Q.7 If the cost of 17m of cloth is Rs $77\frac{5}{7}$. Find its cost per metre.

Q.8 A rectangular sheet of paper is $12\frac{1}{2}$ cm long and $10\frac{2}{3}$ cm wide. Find its perimeter.

Q.9 Which is greater.

i. $\frac{2}{7}$ of $\frac{3}{4}$ OR $\frac{3}{5}$ of $\frac{5}{8}$	ii. $\frac{1}{2}$ of $\frac{6}{7}$ OR $\frac{2}{3}$ of $\frac{3}{7}$
---	--

Q.10 The cost of a book is Rs25.75. How many books can be purchased for Rs2472?

NTSE based question.

Q.1 The sum of $3\frac{4}{5} + 2\frac{7}{10} + 4\frac{8}{15}$ is:-

a. $\frac{68}{15}$

b. $\frac{331}{30}$

c. $\frac{27}{10}$

d. $\frac{325}{30}$

Q.2 The value of $63 \times 7 - 28 \times 89 + 76.4 - 37.66$ is:-

a. 2012.26

b. 2014.26

c. -2012.26

d. -2014.26

Q.3 A farmer has 192 animals. $\frac{7}{16}$ of animals are cattle, $\frac{2}{3}$ of cattle are dairy cows.

How many dairy cows he has.

a. 128

b. 84

c. 56

d. 112

Q.4 If $x\%$ of $24 = 64$, then the value of x is :-

a. $37\frac{1}{2}$

b. $133\frac{1}{3}$

c. $266\frac{2}{3}$

d. $66\frac{2}{3}$

Q.5 The cost of 28 days of the same kind is Rs 3462.20, then the cost of each toy is:-

a. Rs123

b. Rs123.65

c. Rs124.65

d. Rs122.65

Q.6 Which of the following statements is true?

a. $\frac{9}{16} = \frac{13}{24}$

b. $\frac{9}{16} < \frac{13}{24}$

c. $\frac{9}{16} > \frac{13}{24}$

d. none of
these

Q.7 By what number should $1\frac{1}{2}$ be divided to get $\frac{2}{3}$?

a. $2\frac{2}{3}$

b. $1\frac{2}{3}$

c. $\frac{4}{9}$

d. $2\frac{1}{4}$

Q.8 The perimeter of a square is $43\frac{1}{6}$ cm. Find the length of each side of the square.

a. $172\frac{2}{3}$ cm

b. $10\frac{19}{24}$ cm

c. $64\frac{1}{2}$ cm

d. $10\frac{9}{24}$ cm

Q.9 Reciprocal of $\frac{5}{4} \times \frac{7}{3}$ is:-

a. $\frac{5}{4} \times \frac{7}{3}$

b. $\frac{4}{5} \times \frac{3}{7}$

c. $\frac{4}{5} \times \frac{7}{3}$

d. $\frac{5}{4} \times \frac{3}{7}$

Q.10 Find the value of $9\frac{2}{5} - 4\frac{1}{2} - 3\frac{1}{3}$

a. $8\frac{7}{30}$

b. $4\frac{9}{10}$

c. $1\frac{17}{30}$

d. $1\frac{9}{10}$

Q.11 By selling tickets for Rs $52\frac{1}{2}$ each , the money collected was Rs $5512\frac{1}{2}$. Find the number of ticket sold.

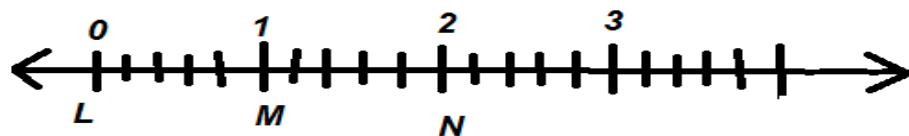
a. 105

b. 289

c. 106

d. 546

Q.12 In the given number line, point M represents which of the following fractional number?



a. $\frac{2}{8}$

b. $\frac{6}{5}$

c. $\frac{2}{3}$

d. $\frac{7}{10}$

Q.13 From a wire $10\frac{1}{2}$ meters long. Samir cut off 5 pieces of $1\frac{1}{4}$ meter each. How much length of the wire was left.

a. $4\frac{1}{4}$ m

b. $21\frac{1}{4}$ m

c. $6\frac{1}{4}$ m

d. $5\frac{1}{4}$ m

Q.14 A book consists of 216 pages. During last week Vikas read $\frac{3}{4}$ of the book. How many pages did he read.

a. 162

b. 160

c. 161

d. 262

Q.15 Reenu spends $\frac{4}{5}$ of her income on household expanses. Her monthly income is Rs 15000. How much does she save every month.

a. 3000

b. 4000

c. 5000

d. 2000



**LORD
KRISHNA**

Affiliated to CBSE
**PUBLIC
SCHOOL**
Affiliation No. 530600

Class – 7th

Subject : Hindi

1. स्वतंत्रता से पूर्व भारत के नागरिकों की स्थिति कैसी रही होगी?
अंग्रेज भारतीयों पर किस तरह के अत्याचार करते होंगे? इतिहास की पुस्तक से जानकारी प्राप्त कर लिखिए।
2. आपके मन में भारतमाता की जो तस्वीर उभरती है, उसे अपनी परियोजना-पुस्तिका में चित्र के रूप में उतारिए और उसमें मनपसंद रंग भरिए।
3. सुमित्रानंदन पंत का जन्म कब और कहाँ हुआ था?
4. पंत जी को भारत सरकार ने किस सम्मान से अलंकृत किया?
5. 'भारतमाता' कविता कब लिखी गई?
6. 'भारतमाता' कविता के कवि का क्या नाम है?
7. 'भारतमाता' कविता में भारतीयों की दशा कैसी थी? वर्णन कीजिए।
8. अब तक हिन्दी में किन-किन साहित्यकारों को ज्ञानपीठ पुरस्कार मिल चुका है? एक सूची तैयार कीजिए।
9. सुमित्रानंदन पंत को 'चिदंबरा' के लिए कब और कौन-सा पुरस्कार मिला था?
10. छटांक, तोला और आना के बारे में अपने घर के बुजुर्गों से जानकारी प्राप्त कीजिए।
11. दूसरों की सहायता करके प्राप्त हुए आनंद का अनुभव कीजिए।
12. 'कदंब का पेड़' कविता को पढ़कर याद कीजिए।
13. 'त्वरित' और 'कल्पित' शब्द का अर्थ बताओं।
14. 'झांसी की रानी' कविता किसके द्वारा रचित है?
15. सुभद्रा कुमारी चौहान द्वारा रचित 'हींगवाला' कहानी से हमें क्या सीख मिलती है?
16. सुभद्रा कुमारी चौहान द्वारा रचित प्रमुख कृतियाँ लिखिए।

व्याकरण

1. ऑनलाइन और ऑफलाइन पढ़ाई में अंतर स्पष्ट कीजिए। ऑनलाइन पढ़ाई के दौरान आपके टीचर्स और फोन की क्या भूमिका रही स्पष्ट कीजिए।
2. अपना पसंदीदा खेल कौन सा है? जिसे आप सबसे ज्यादा खेलना पसंद करते हैं? इस खेल में कितने खिलाड़ी होते हैं? तथा यह खेल आपको अच्छा क्यों लगता है लिखिए।
3. दिए गए साहित्य उचित कॉलम में लिखिए?
(गीत, कहानी, दोहा, चौपाई, उपन्यास, पत्र, छंद, जीवनी, संस्मरण, कविता)
4. भाषा शब्द कैसे बना है?
5. देवनागरी लिपि का विकास किस प्राचीन लिपि से हुआ है?
6. 'राष्ट्रभाषा' से आप क्या समझते हैं?
7. तमिलनाडु में जन्म लेने वाले बच्चे की मातृभाषा क्या होगी?
8. भारतीय संविधान द्वारा मान्यता प्राप्त 22 भाषाओं के नाम लिखो।
9. ध्वनि का सामान्य अर्थ क्या है?
10. भाषा के चार कौशल कौन-से माने गए हैं?
11. हलंत किसे कहते हैं? उदाहरण सहित लिखिए।
12. वर्णों का उच्चारण मुख के जिस भाग से किया जाता है, उसके नाम लिखें।
13. वर्ण-विच्छेद कीजिए— परीक्षा, राष्ट्रीय, पृष्ठ
14. बहुत से शब्द उलटे और सीधे दोनों प्रकार से पढ़े जाने पर वही रहते हैं। जैसे – कनक, जहाज़ आप भी अपने साथियों के साथ मिलकर इस प्रकार के शब्द खोजिए और उनकी सूची बनाइए।
15. निम्नलिखित वाक्यांशों के लिए वर्ग-पहेली से एक शब्द चुनकर लिखिए।

क) दूसरों का उपकार करने वाला –

ख) जिसका कोई अंत न हो –

ग) पुराणों से संबंध रखने वाला –

घ) जो प्रति सप्ताह होता हो –

ड) जिसकी कीमत न आंकी जा सके –

च) जो शाक –सब्जी खाता हो –

अ	नं	त	स	र	अ	न
मू	पा	शा	पौ	प	द	स
ल्य	श	स्त्र	रा	रो	म्य	र्व
कृ	त	ज्ञ	णि	प	प्र	व्या
सा	प्ता	हि	क	का	ति	प
त	शा	का	हा	री	श	क

Multiple Choice Questions:-

Q1. How many teams participated in IPL - 2014?

- a) 10 b) 11 c) 9 d) 8

Q2. Who is the owner of Team - Delhi Daredevils?

- a) Shahrukh Khan b) GMR Group c) Preity Zinta d) India Cements

Q3. Who was the captain of Team – Sunrisers Hyderabad?

- a) Shane Watson b) Rohit Sharma c) Virat Kohli d) Shikhar Dhawan

Q4. Which team won IPL - 2014?

- a) Kings XI Punjab b) Chennai Superkings c) Kolkata Knightriders d) Rajasthan Royals

Q5. Who was the highest run scorer in IPL - 2014?

- a) Robin Uthappa b) Glenn Maxwell c) Dwayne Smith d) Chris Gayle

Q6. Who was the highest wicket taker in IPL - 2014?

- a) Bhuvneshwar Kumar b) Mohit Sharma c) Sunil Narine d) Lasith Malinga

Q7. Which colour cap is given to the highest run scorer in IPL?

- a) Red b) Green c) Purple d) Orange

Q8. Who won the most valuable player of IPL – 2014?

- a) Glenn Maxwell b) Dwayne Smith c) Robin Uthappa d) Sunil Narine

Q9. Who won the Pepsi emerging player Award at IPL - 2014?

- a) Mandeep Singh b) Naman Vohra c) Akshar Patel d) Sanju Samson

Q10. Who bowled the fastest ball at IPL – 2014 @ 152.44 km/hr?

- a) Morne Morkel b) Lasith Malinga c) Umesh Yadav d) Dale Steyn

Q11. Who hit the maximum number of sixes in IPL – 2014 (36 in all)?

- a) Glenn Maxwell b) Dwayne Smith c) Yuvraj Singh d) David Warner

Q12. Who hit the fastest century of IPL - 2014?

- a) Wriddhiman Saha b) Virender Sehwag c) Glenn Maxwell d) Lendl Simmons

Q13. Where was IPL – 2014 organized?

- a) UAE and India b) South Africa and India c) India d) UAE

Q14. Who made the highest individual score at IPL - 2014?

- a) Wriddhiman Saha b) David Warner c) Glenn Maxwell d) Virender Sehwag

Fill in the blanks:-

- 1) The FIFA World Cup 2014 was held in _____.
- 2) _____ won the FIFA World Cup 2014.
- 3) _____ won the Golden Ball Award at FIFA World Cup 2014.
- 4) _____ won the Golden Boot Award at FIFA World Cup 2014.
- 5) _____ was the Runners Up at FIFA World Cup 2014.

Match the Following:-

- | | |
|--|-----------------------------|
| 1) Home Minister | 1) Dr.Harsh Vardhan |
| 2) External Affairs Minister | 2) Mr.Arun Jaitley |
| 3) Finance Minister | 3) Mr.D.V.Sadananda Gowda |
| 4) Human Resource Development Minister | 4) Mr.Ashok Gajapathi Raju |
| 5) Health and Family Welfare Minister | 5) Smt.Menaka Gandhi |
| 6) Railway Minister | 6) Smt.Sushma Swaraj |
| 7) Food Processing Industries Minister | 7) Smt.Smriti Irani |
| 8) Civil Aviation Minister | 8) Mr.Kalraj Mishra |
| 9) Micro,Small and Medium Ent Minister | 9) Smt.Harsimrat Kaur Badal |
| 10) Women and Child Development Minister | 10) Mr.Rajnath Singh |