

ENGLISH – ASSIGNMENT

Q. A. Tick the correct answers.

1. When Ollie was about seven weeks old, his parents put him penguin chicks.

- a. Creche b. Rehabilitation c. South pole

2. Out of the 18 recognised species of penguins in the world are in danger.

- a. 20 b. 13 c. 10

3. When he was born, Ollie was covered with –

- a. Feathers b. Downy fluff c. Scales

B. Mark these sentences as true (T) or false (F).

1. Ollie lived in a colony of penguins in the icy continent of Antarctica.
2. Ollie had webbed feet.
3. Ollie was very happy when he was tightly squeezed and soapy liquids were poured on his feathers.
4. Ollie was a very good swimmer and he loved to dive into the icy cold water.

ANSWER THESE QUESTIONS-

Q.1 Where did Ollie live?

Q.2 Why did father penguin tell Ollie live?

ENGLISH GRAMMER

Q.1 Underline the countable nouns and circle the uncountable nouns.

TEA	CARROT	EGGS	SOUP
PASTA	RICE	WATER	TOMATO
BOTTLES	SOUP	PENCILS	FLOUR
WOOD	SANDWICH	SUGAR	COFFEE

Q.2 Complete the nouns by writing the missing letters.

1. D _ _ T O R
2. _ _ A _ _ L E
3. _ _ I S _ _ E R
4. P _ _ N _ _ I L
5. H _ _ U _ _ E
6. _ _ R U _ _ T.

Q.3 Underline the nouns in these sentences. Remember a sentence can have more than one noun.

1. Delhi is the capital of India.
2. My village is sihma.
3. Radha went to the market to get some ice- cream.
4. My pen is not in my bag.

Q.4 Use the nouns from the box to complete these sentences.

LAWYER, COBBLER, GREENGROCER, MARBLE.

1. You can take shoes to the _____ for repair.
2. This _____ sells fresh vegetables.
3. My uncle is a _____ at the Supreme Court.



LORD KRISHNA

Affiliated to CBSE
PUBLIC SCHOOL
Affiliation No. 530600

Class – 4th

Assignment

Q.1 Write the number name for each numerals.

(i) 8 7 4 5

(ii) 9 6 0 0

(iii) 6 0 5 0

Q.2 Subtract the following.

(i) Km

M

9 1 5

3 6 6

- 3 4 7

2 1 4

(ii)

Rs.

P.

5 9 7

7 6

- 3 8 9

8 4

Q.3 Fill in the blanks.

(i) $15 \times 7 =$ _____

(ii) $14 \times 8 =$ _____

Q.4 Write the following number in Roman numerals.

(i) 16

(ii) 34

(iii) 46

(iv) 29

Q.5 Convert into Paise

(i) Rs 27.87

(ii) Rs 92.30

Q.6 Put the correct sign <, > or =

(i) 9998 9990

(ii) 8070 8117

Q.7 Write in the expanded form.

(i) 7503

(ii) 9992

Q.8 Find the products.

(i) 8 0 7 5

(ii) 9 6 5 2

$\times 2$

$\times 7$

Q.9 Divide.

(i) $2898 \div 3$

(ii) $6579 \div 6$

Q.10 If there were 110 children in one class, how many children are there in 9 class.



CLASS – 4th ASSIGNMENT

Q.1 Tick the correct option-

i. Building of Muscles and repairing of tissues in our body is done by-

- a. Fats b. Protiens c. Carbohydrates.

ii. Which food is called body- building food?

- a. Vitamins b. Proteins c. Fats

iii. A stage of being fat or overweight-

- a. Obesity b. Strong c. Fatty

iv. The distinctive taste of a food or drink-

- a. Taste b. Flavour c. Nutrients

v. Consuming too much fats leads to –

- a. Obesity b. Weakness c. Strength

vi. Fruits and vegetables are rich sources of –

- a. Vitamins b. Minerals c. 'a' and 'b' both.

vii. A substance that provides nourishment for the body is called as-

- a. Nutrients b. Fats c. Proteins

Q.2 Gve two examples of the following foods

- i. Energy giving foods-
- ii. Body building foods-
- iii. Protective foods-

Q.3 What is the special dish of Punjab?

Q.4 What is the special dish of Tamilnadu?

Q.5 What are the main nutrients in the food?

Q.6 Write the method of cooking for chapatti?

EVS – ASSIGNMENT - 1

CLASS- 4

Q.1 Unscramble the following words and make the meaningful words:-

- i. R I N A Y U R :-
- ii. E R L A D D B :-
- iii. L E L C S :-
- iv. U T H M O :-
- v. R A B I N :-

- Q.2**
- A. An adult has _____ bones.**
- B. The waste from our body is removed by the _____.**
- a. Lungs b. Brain c. Kidney
- C. The nervous system consists of brain , spinal cord and ?**
- a. Stomach b. Nerves c. Vessels
- D The skeletal system is made up of:-**
- a. Bones b. Muscles c. Nerves

Q.3 Circle the odd one out.

- | | | | |
|--------------------|---------|---------|-------------|
| 1. Ear | Nose | Heart | Skin |
| 2. Small intestine | Kidneys | Stomach | Saliva |
| 3. Blood | Nerves | Heart | Circulation |
| 4. Kidneys | Urine | Brain | Sweat |

Q.4 Name two organs of each of the following system.

- i. Digestive system ii. Respiratory system
- iii. Circulatory system iv. Nervous system
- v. Excretory system

- Q.5**
- A. Describe the functioning of the digestive system?**
- B. Which part of the excretory system throws out solid waste?**
- c. How many muscles make up the muscular system?**
- D. i. Give two examples of each of the following:-**

- a. Energy giving food _____
- b. Body building foods _____

2nd Assignment

Class – 4

Q.1 Tick the correct option-

i. Bulding of muscles and repairing of tissues in our body is done by-

- a. fats b. proteins c. carbohydrates

ii. Which food is called body- building food?

- a. vitamins b. proteins c. fats

iii. A stage of being fat or overweight-

- a. obesity b. strong c. fatty

iv. The distinctive taste of a food or drink-

- a. taste b. flavour c. nutrients

v. Consuming too much fats leads to-

- a. obesity b. weakness c. strength

vi. Fruits and vegetables are rich sources of-

- a. vitamins b. minerals c. 'a' and 'b' both

vii. substance that provides nourishment for the body is called as-

- a. nutrients b. fats c. proteins

Q.2 Give two examples of the following foods-

i. Energy- giving foods _____ _____

ii. Body- building food _____ _____

iii. Protective foods _____ _____

Q.3 What is the special dish of Punjab?

Q.4 What is the special dish of Tamilnadu?

Q.5 What are the main nutrients in the food?

Q.6 Write the method of making chapatti?

CLASS – 4th

ASSIGNMENT

(Hindi)

प्र०.1 सही उत्तर चुनकर लिखिए :-

1. हमें रहना चाहिए एक – दूसरे के साथ –

1. लड़ – झगड़कर

2. चोट पहुँचाकर

3. मिलजुलकर

2. पापा दिन – भर कुत्ते की तरह भागते रहें –

1. दोनों हाथों पर

2. दोनों पैरों पर

3. चारों हाथ – पैरों पर

3. चंद्रमा किसके चारों ओर चक्कर लगाता है?

1. सूरज के

2. तारे के

3. पृथ्वी के

4. भाषण देते समय ————— भाषा का प्रयोग करते हैं।

1. मौखिक

2. लिखित

3. सांकेतिक

5. शब्दों के मे से ————— बनते हैं।

1. वाक्य

2. समूह

3. व्यंजन

प्र०.2 अशुद्ध वाक्यों को शुद्ध करके लिखिए।

1. मैं तेरी शरण में आया हूँ।

2. अपनी कानों से अच्छा सुनो।

3. बस कामना है यह हमारे।

4. हमें अच्छा कर्म करने चाहिए।

5. पूरा ही बना त्यागि।

प्र०.3 वर्ण – विच्छेद कीजिए।

1. साधना –

2. नयन –

3. बलिदान —

4. प्राकाश —

5. बाहर —

6. धरती —

7. चमकीला —

8. आसमान —

प्र०.4 निम्नलिखित प्रश्नों के उत्तर दीजिए :-

1. बालक किसकी शरण में रहने की कामना करते हैं?
2. आप प्रातः काल प्रशु से क्या कामना करते हों?
3. पापा ने कुत्ते की तरह क्या सीखने की कोशिश की?
4. आप बड़े होकर क्या बनना चाहते हों? लिखिए।
5. एक अच्छा इन्सान बनने के लिए हम में क्या — क्या गुण होने चाहिए।
6. चाँउद गोल कब दिखई देता हैं?
7. चंद्रमा किसके प्रकाश से चमकता हैं?
8. 'तुम धरती के कौन — से भाग से आई हों? किसने और किससे कहा?


प्र०.5 निम्नलिखित प्रश्नों के उत्तर दीजिए:-

1. भारत की राजभाषा कौन सी हैं?
2. स्पर्श व्यंजन किसे कहते हैं?
3. संयुक्त व्यंजन कौन — कौन से हैं?
4. उद्देश्य किसे कहते हैं?
5. सार्थक शब्द किसे कहते हैं?

1. Largest state-.....
2. Smallest state.....
3. Least populous states-
4. Longest river -.....
5. Lowest literate state-.....
6. Biggest desert -.....
7. Highest mountain peak -.....
8. Greatest mountain range -.....
9. Largest dome-.....
10. Highest dam-.....
11. Its capital is the largest city in the country-
.....
12. The world's richest temple where pilgrims offer their hair is
situated here-.....
13. Its capital is famous for Marina, the second longest beach
in the world -.....
14. It has the longest dam in the world-.....
15. This state has the largest area of forest land?
16. Ramoji Film City is the largest film studio complex in the world.
It is in.....
17. It is the second smallest state-.....
18. The longest railway platform is in Kharagpur,.....



Marina Beach



Tirupati Balaji

REASONING ASSIGNMENT

class- 4th

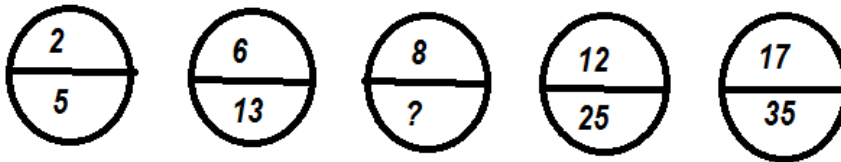
CHAPTER- 1 PATTERNS

Q.1 Which number will replace the question mark in the number pattern given below?

100, 81, 64, 36, 25, 16, 9, ? .

- a. 1 b. 2 c. 3 d. 4

Q.2 What is the missing number in the series given below?



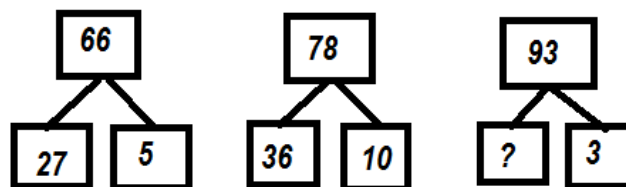
- a. 17 b. 27 c. 35 d. 41

Q.3 What is the next number in the given number pattern?

4, 7, 12, 19, 28, ? .

- a. 30 b. 36 c. 39 d. 49

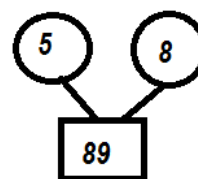
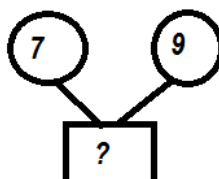
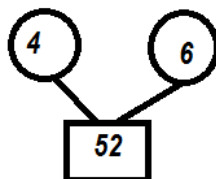
Q.4 Which number will replace the question mark in the number bond below?



- a. 34 b. 30 c. 33 d. 35

Q.5 Find the missing number-

- a. 127
b. 130
c. 141
d. 137



Q.6 Find the missing number.

- a. 32
- b. 144
- c. 68
- d. 125

5	4	81
8	4	?
3	5	64

Q.7 Which of the following options will continue the given series?

23Z, 28X 35V 44T 55R _____.
a. 27U b. 68P c. 65U d. 47U

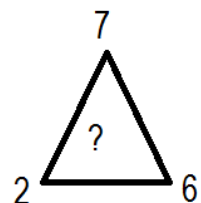
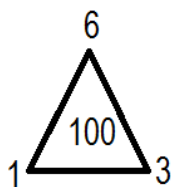
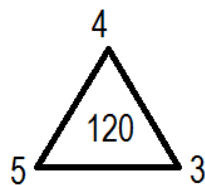
Q.8 Find the missing number.

- a. 121
- b. 111
- c. 110
- d. 118

4	11	9
6	2	7
8	5	4
193	?	253

Q.9 Find the missing number.

- a. 100
- b. 110
- c. 180
- d. 150



Q.10 Find the missing number.

95, 92, 87, 84, 79, ?, 71.

- a. 70
- b. 76
- c. 72
- d. 78