



Test Booklet No.

111393690



Test Booklet Code

12

ENGLISH

KAILASH

Do not open this Test Booklet until you are asked to do so.
This Booklet contains 32 pages, including Rough Pages.

Important Instructions :

1. The Answer Sheet is inside this Test Booklet. When you are directed to open the Test Booklet, take out the Answer Sheet and fill in the particulars on ORIGINAL Copy carefully with blue/black ball point pen only.
2. The test is of 3 hours duration and the Test Booklet contains 180 multiple-choice questions (4 options with a single correct answer) from Physics, Chemistry and Biology (Botany and Zoology).
3. Wherever the symbols/constants are not mentioned, they are to be considered as per their standard meaning/value.
4. Each question carries 4 marks. For each correct response, the candidate will get 4 marks. For each incorrect response, one mark will be deducted from the total scores. The maximum marks are 720.
5. Use Blue/Black Ball Point Pen only for writing particulars on this page/markings responses on the Answer Sheet.
6. Rough work is to be done in the space provided for this purpose in the Test Booklet only.
7. On completion of the test, the candidate must hand over the Answer Sheet (ORIGINAL and OFFICE Copy) to the Invigilator before leaving the Room/Hall. The candidates are allowed to take away this Test Booklet with them.
8. The CODE for this Booklet is "12". Make sure to enter this Booklet code in the OMR Answer Sheet.
9. The candidates should ensure that the Answer Sheet is not folded. Do not make any stray marks on the Answer Sheet. Do not write your Roll No. anywhere else except in the specified space in the Test Booklet/Answer Sheet.
10. Use of white fluid for correction is *not* permissible on the Answer Sheet.
11. Each candidate must show on demand his/her Admit Card to the Invigilator.
12. No candidate, without special permission of the Centre Superintendent or Invigilator, should leave his/her seat.
13. The candidates should not leave the Examination Hall without handing over their Answer Sheet to the Invigilator on duty and sign (with time) the Attendance Sheet twice. Cases, where a candidate has not signed the Attendance Sheet a second time, will be deemed not to have handed over the Answer Sheet and dealt with as an Unfair Means case.
14. Use of Electronic/Manual Calculator is prohibited.
15. The candidates are governed by all Rules and Regulations of the examination with regard to their conduct in the Examination Room/Hall. All cases of unfair means will be dealt with as per the Rules and Regulations of this examination along with Public Examinations (Prevention of Unfair Means) Act, 2024.
16. No part of the Test Booklet and Answer Sheet shall be detached under any circumstances.
17. The candidates will write the Correct Test Booklet Code as given in the Test Booklet/Answer Sheet in the Attendance Sheet.
18. If a candidate marks more than one answer for a question in the OMR Answer Sheet, it will be treated as incorrect and negative marking will be applicable.

Name of the Candidate (in Capitals) : _____

Roll Number : in figures _____

: in words _____

Centre of Examination (in Capitals) : _____

Candidate's Signature : _____

Invigilator's Signature : _____

Facsimile signature stamp of Centre Superintendent : _____

Physics

1. A 100-turn closely wound circular coil of radius 5 cm has a magnetic field of 3.14×10^{-3} T at its centre. The current flowing through the coil, and the magnitude of the magnetic moment of this coil are, respectively:

(Take $\mu_0 = 4\pi \times 10^{-7}$ T m/A)

Correct Answer (1)

(1) 2.5 A, 2 A m

2. Match List I with List II:

List I

List II

A. $h\nu$

I. de Broglie wavelength

B. Diffraction and Interference

II. Particle nature of light

C. $\lambda = h/p$

III. Wave nature of light

D. Compton effect

IV. Energy of photon

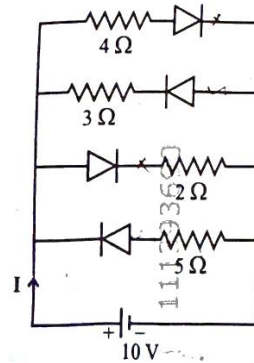
Choose the correct answer from the options given below:

Correct Answer (1)

(1) A-IV, B-III, C-I, D-II

3. The current I in the circuit shown below is :

(All diodes are ideal and identical)



Correct Answer (2)

(2) $\frac{15}{2}$ A

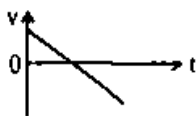
4. The speed of light in vacuum is taken as unity. If light takes 6 min 40 s to reach the Earth from the Sun, the distance between the Sun and the Earth in 1 new unit is :

Correct Answer (3)

(3) 400

5. The following plots show variation of velocity (v) with time (t), of a ball thrown vertically upward, and falling back. Which of the following plots is/are correct ?

Correct Answer (1)



(1) C Only

6. In a vernier callipers, 20 VSD coincide with 16 MSD (each division of length 1 mm). The least count of the vernier callipers is :

Correct Answer (3)

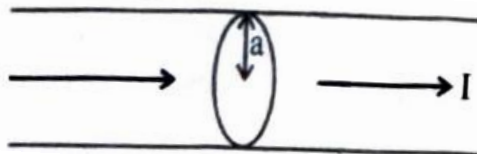
(3) 0.02 cm

7. An ac circuit contains a resistance of $1\text{ k}\Omega$, a capacitor of $0.1\text{ }\mu\text{F}$ and an inductor of 1 mH connected in series. The resonance frequency of the circuit is approximately :

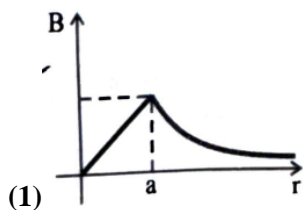
Correct Answer (3)

(3) 15.9 KHz

8. The figure given below shows a long straight solid wire of circular cross-section of radius ' a ' carrying steady current I . The current I is uniformly distributed across its cross-section. The plot which correctly represents the variation of magnetic field (B) with distance (r) from the axis of the conductor in the region is :

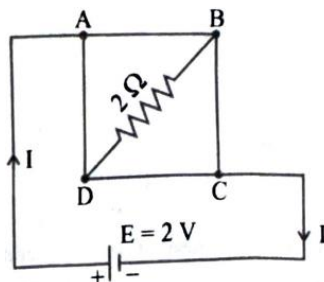


Correct Answer (1)



(1)

9. A uniform metallic wire having resistance $4\text{ }\Omega$ is bent to form a square loop (ABCD) (see figure). A resistance of $2\text{ }\Omega$ is connected between points B and D and a battery of 2 V is connected across points A and C as shown in the figure. Now the value of current (I) is:



Correct Answer (1)

(1) 2 A

10. An unknown nucleus has a nuclear density of $2.29 \times 10^{17} \text{ kg/m}^3$ and mass of $19.926 \times 10^{-17} \text{ kg}$ mass number A is approximately:

Correct Answer (1)

(1) 12

11. A rectangular wire loop of sides 8 cm and 3 cm with a small cut, is moving out of a region of uniform magnetic field of magnitude 0.3 T directed normal to the plane of the loop. The emf developed across the cut, if the velocity of the loop is 2 cm s^{-1} , in a direction normal to the shorter side of the loop, will be :

Correct Answer (1)

(1) $1.8 \times 10^{-4} \text{ Volt}$

12. A galvanometer of resistance 100Ω gives full scale deflection for a current of 1 mA. It is converted into an ammeter of range 0 – 10 A. The shunt required is:

Correct Answer (1)

(1) 0.01Ω

13. In Young's double slit experiment, using monochromatic light of wavelength, λ the intensity a point on the screen where the path difference is K units. The intensity of light at λ a point where the path difference is $\frac{\lambda}{3}$ will be :

Correct Answer (1)

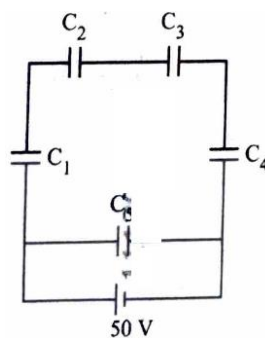
(1) $\frac{k}{4}$

14. The magnitude and direction of the acceleration produced in a body of mass 5 kg when two mutually perpendicular forces 8 N and 6 N act on it, are respectively:

Correct Answer (3)

(3) $2 \text{ m s}^{-2} \tan^{-1} (3/4)$ with 8 N force

15. Five capacitors of capacitances $C_1 = C_2 = C_3 = C_4 = 10 \mu\text{F}$ and $C_5 = 2.5 \mu\text{F}$ connected as shown, along with a battery of 50 V.

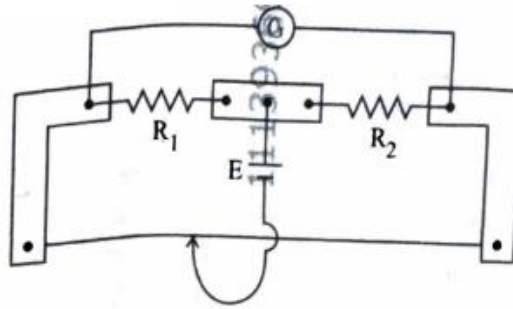


The equivalent capacitance and the charges on each capacitor respectively are :

Correct Answer (1)

(1) $5 \mu\text{F}$, $125 \mu\text{C}$ on all capacitor

16. In a metre bridge experiment (see figure), the positions of the cell, E, and galvanometer, G, are interchanged. We shall observe in the galvanometer :



Correct Answer (4)

(4) Both Right – side and left – sided deflection and at balanced point deflection

17. The power of a crane which lifts a mass of 1000 kg to a height of 20 m in 5 s is : ($g = 9.8 \text{ m/s}^2$)

Correct Answer (4)

(4) 19.6 kW

18. Match List I with List II :

List I

List II

A. Young's Modulus

I. $\frac{\Delta d}{\Delta L} \left(\frac{L}{d} \right)$

B. Compressibility

II. $\frac{FL}{A(\Delta L)}$

C. Bulk Modulus

III. $-\frac{1}{\Delta P} \left(\frac{\Delta V}{V} \right)$

D. Poisson's Ratio

IV. $-P \left(\frac{V}{\Delta V} \right)$

Choose the correct answer from the options given below:

Correct Answer (4)

(4) A- II, B-III, C-IV, D- I

19. In a concave lens, a ray of light emanating from the object parallel to the principal axis of the lens, after refraction :

Correct Answer (2/ Bonus)

(2) appears to diverge from the first principal focus.

Bonus

20. A thin wire of length 'L' and linear mass density 'm' is bent into a circular ring (in x-y plane) with centre 'C' as shown in figure. The moment of inertia of the ring about an axis yy' will be:

Correct Answer (1)

(1) $\frac{3mL^3}{8\pi^2}$.

21. Each side of a metallic cube of mass 5.580 kg is measured 16 be 9-0 cm. Keeping the significant figures in view, the density of the material of the cube can be best expressed as $x \times 10^3$ kg M⁻³ where the value of X is :

Correct Answer (2)

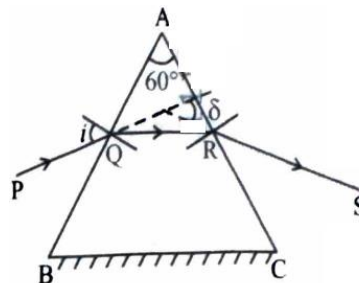
(2) 7.7

22. For a travelling harmonic wave $y(x, t) = 2.0 \cos 2 \pi (10t + 0.0080 x + 0.35)$, where x and y are in cm and t in s. The phase difference between oscillatory motion of two points separated by a distance of 0.5 m is :

Correct Answer (4)

(4) 0.8π rad

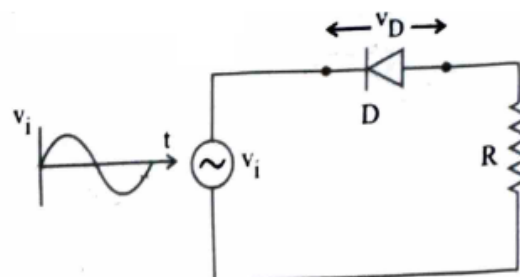
23. A ray of monochromatic light is passing through an equilateral prism (ABC) as shown in the figure. The refracted ray (QR) is parallel to its base (BC) and the angle of incidence (i) is 50⁰ deg Then the angle of deviation) is:



Correct Answer (1)

(1) 40⁰

24. In the circuit shown below, the voltage appearing across the diode D will be of the form :



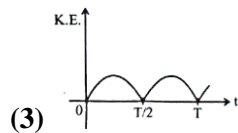
Correct Answer (2)



(2)

25. For a simple pendulum, having time period T , the variation of kinetic energy (K.E.) with time (t) is represented by :

Correct Answer (3)



(3)

26. A resistor is connected to a battery of 12 V emf and internal resistance 2Ω . If the current in the circuit is 0.6 A, the terminal voltage of the battery is:

Correct Answer (2)

(2) 10.8 Volt

27. The amount of work done to raise a mass ' m ' from the surface of the Earth to a height equal to the radius of the Earth ' R ', will be :

Correct Answer (4)

(4) mgR

28. An electric heater supplies heat to a system at a rate of 100 W. If the system performs work at a rate of 75 J / s, then the rate at which internal energy increases will be:

Correct Answer (3)

(3) 25 W

29. A room heater is rated 400 W, 220 V. If the supply voltage drops to 200 V, what will be the power consumed (approximately) ?

Correct Answer (2)

(2) 331

30. When a ruler falls vertically, 5 different persons catch it with different reaction times.

($g = 9.8 \text{ ms}^{-2}$)

A. Person A has reaction time of 0-20 s.

B. Person B has reaction time of 0-22 s.

C. Person C has reaction time of 0-18 s.

D. Person D has reaction time of 0-19 s.

E. Person E has reaction time of 0-21 s.

What is the correct order of the distance travelled by the ruler for each person ?

Correct Answer (4)

(4) B>E>A>D>C

31. Consider two uncharged capacitors of equal capacitance 200 pF. One of them is charged by a 100 V supply and disconnected. Now this capacitor is connected to the uncharged capacitor. The amount of electrostatic energy lost in the process is :

Correct Answer (2)

(2) $0.5 \times 10^{-6} \text{J}$

32. Savitha, a XI standard student, while conducting an experiment to determine the effective length of a simple pendulum L, notes down the data of time taken to complete 30 oscillations as 60 s and hence calculates the length of the simple pendulum as :

(Take $\pi^2 = 9.8$ and $g = 9.8 \text{m / s}^2$)

Correct Answer (4)

(4) 1 m

33. The peak value of an alternating current is 5 A and frequency is 60 Hz. How long will the current, starting from zero, take to reach the peak value ?

Correct Answer (1)

(1) $\frac{1}{240} \text{s}$

34. In interference and diffraction, the light energy is redistributed. It reduces in one region, producing a dark fringe it increases in another region, producing a bright fringe.

A. As there is no gain or loss of energy, these phenomena are consistent with the principle of conservation of energy.

B. Diffraction and interference are characteristics exhibited only by light waves.

Choose the correct answer from the options given below:

Correct Answer (1)

(1) A is true, but B is false

35. A box of mass 15 kg is kept on the floor of a stationary trolley. The coefficient of static friction between the box and the trolley is 0.12. Keeping the box in stationary state over the trolley, the maximum acceleration with which the trolley can be moved horizontally in ms^{-2} is:

Correct Answer (4)

(4) 1.2

36. The sum of kinetic energy and potential energy of a simple pendulum bob is 0.02 joule. The speed of the simple pendulum bob at equilibrium position is approximately:

(Consider mass of the bob = 20 g)

Correct Answer (1)

(1) 1.41 m/s

37. Four statements are given (A is mass number):

- A. The volume of a nucleus is proportional to $A^{1/3}$
- B. The volume of a nucleus is proportional to A.
- C. The difference in mass of an atom and its nucleus is called the mass defect.
- D. The difference in mass of a nucleus and its constituents is called the mass defect.

Choose the correct answer from the options given below:

Correct Answer (1)

(1) B and D are true, but A and C are false

38. The angular speed of a flywheel is increased from 600 rpm to 1200 rpm in 10 s. The number of revolutions completed by the flywheel during this time is:

Correct Answer (4)

(4) 150

39. A submarine is designed to withstand an absolute pressure of 100 atm. How deep can it go below the water surface ?

(Consider the density of water = 1000 kg m^{-3} ,

$1 \text{ atm} = 1 \times 10^5 \text{ Pa}$ and gravitational acceleration $g = 10 \text{ m/s}^2$)

Correct Answer (4)

(4) 990 m

40. Match List I with List II:

List I

(Electromagnetic wave)

- A. Microwave
- B. Visible light
- C. Gamma rays
- D. Infra-red rays

List II

(Production)

- I. Electrons in atoms emit light when they move from a higher energy level to a lower energy level
- II. Radioactive decay of nucleus
- III. Vibration of atoms and molecules
- IV. Klystron valve- or magnetron valve

Choose the correct answer from the options given below:

Correct Answer (4)

(4) A- IV, B-I, C-II, D-III

41. Which of the following statements are correct?
- A. Inside a conductor, the electrostatic field is zero.
 - B. Electric field at the surface of a charged conductor does not depend on its surface charge density.
 - C. The interior of a charged conductor can have no excess charge in the static situation.
 - D. At the surface of a charged conductor, the surface electrostatic field must be normal to the surface at every point.
 - E. The electrostatic potential is zero everywhere inside a charged conductor.

Choose the correct answer from the options given below:

Correct Answer (3)

(3) A, C and D only

42. For a metal of work function 6.6 eV, which of the following wavelengths of incident radiation does not give rise to the photoelectric effect ?

(Take Planck's constant as 6.6×10^{-34} Js)

Correct Answer (1)

(1) 200 nm

43. In the first excited state of hydrogen atom, the energy of its electron is 3.4 eV. The radial distance of the electron from the hydrogen nucleus in this case is approximately :

(Take $1 \text{ eV} = 1.6 \times 10^{-19} \text{ J}$, $e = 1.6 \times 10^{-19} \text{ C}$ and $\frac{1}{4\pi\epsilon_0} = 9 \times 10^9 \text{ N m}^2/\text{C}^2$)

Correct Answer (4)

(4) $2.1 \times 10^{-10} \text{ m}$

44. Two statements are given below:

- A. When the forward bias voltage across p-n junction diode increases above a certain threshold voltage, the diode current increases significantly.
- B. This current is called reverse saturation current.

Choose the correct answer from the options given below:

Correct Answer (2)

(2) Statement A is true, but Statement B is false

45. A flask contains argon and chlorine in the ratio 2:1 by mass. The temperature of the mixture is 27°C . The ratio of root mean square speed of molecules of the two gases $\left(\frac{v_{rms}^{Ar}}{v_{rms}^{Cl}} \right)$ is:

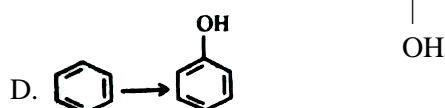
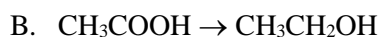
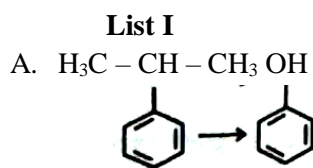
(Atomic mass of argon = 40.0 u and molecular mass of chlorine = 70.0 u)

Correct Answer (1)

(1) $\frac{\sqrt{7}}{2}$

Chemistry

46. Match List I with List II:



List II

i. (i) oleum;

(ii) NaOH, Δ ;

(iii) H^+

ii. (i) O_2 ;

(ii) $\text{H}_2\text{O}/\text{H}^+$

iii. (i) $\text{CH}_3\text{OH}, \text{H}^+$;

(ii) H_2 , catalyst

iv. (i) conc. $\text{H}_2\text{SO}_4, \Delta$;

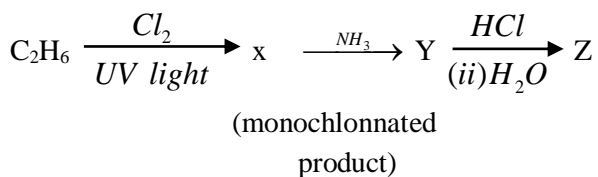
(ii) $\text{H}^+/\text{H}_2\text{O}$

Choose the correct answer from the option given below:

Correct Answer (4)

(1) A- II, B -III, C-IV, D-I

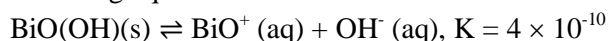
47. The major product z formed in the following sequence of reactions is :



Correct Answer (2)

(2) $\text{C}_2\text{H}_5\text{NO}_2$

48. In a qualitative analysis Bi^{3+} is detected by appearance of precipitate of $\text{BiO}(\text{OH})(\text{s})$. Calculate pH when the following equilibrium exists at 298 K:



(Given : $\log 2 = 0.3010$)

Correct Answer (3)

(3) 9.301

49. When 1 dm^3 of CO_2 gas is passed over hot coke, the volume of gaseous mixture after complete reaction at STP becomes 1.4 dm^3 . The composition of the gaseous mixture at STP is :

Correct Answer (3)

(3) 0.8 dm^3 of CO , 0.6 dm^3 of CO_2

50. Match List I with
(Quantum Numbers)

'n' 'l'

A. 2 1

B. 4 0

C. 5 3

D. 3 2

List II:

(orbital)

I. 3d

II. 2p

III. 4s


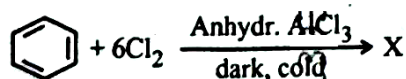
IV. 5f

Choose the right answer from the option given below :

Correct Answer (1)

(1) A-II, B-III, C-IV, D-I

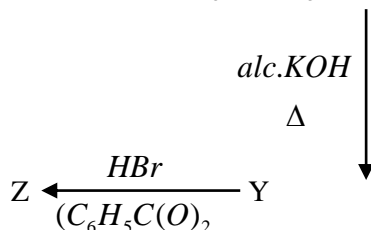
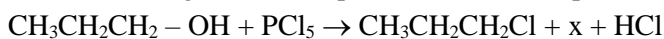
51. The number of chlorine atoms present in the organic product X and Y of the following reactions, respectively are



Correct Answer (2)

(2) 6 and 6

52. In the following reaction sequence, X and Z, respectively are :



Correct Answer (4)

(4) X = POCl₃ ; Z = CH₃CH₂CH₂-Br

53. Match List I with List II

List I

(Transition metal/ compound/ complex)

- A. V₂O₅
B. Fe
C. PdCl₂
D. Ni complex

List II

(Catalytic Role)

- I. Preparation of ammonia from N₂/H₂ mixture
II. Polymerisation of alkynes
III. Preparation of H₂SO₄ from SO₂
IV. Oxidation of ethyne to ethanal

Choose the correct answer from the options given below :

Correct Answer (4)

(4) A-III, B-I, C-IV, D-II

54. Identify the correct statement about ClF₃ from the following options :

Correct Answer (2)

(2) It has T-shaped geometry with two lone pairs on Cl atom.

55. Calculate emf of the half cell given below : Pt(s) | H₂(g, 2 atm) | HCl (aq, 0.02 M)

$$E^\circ_{\text{H}_2/\text{H}^+} = 0\text{V}$$

$$\text{(Given: } \frac{2.303RT}{F} = 0.059, \log 2 = 0.3010\text{)}$$

Correct Answer (1)

(1) 0.109 V

56. Match List I with List II:

| List I (Order of reaction) | List II (Unit of rate constant) |
|-------------------------------|--|
| A. Zero order | I. $\text{mol}^{-1} \text{L s}^{-1}$ |
| B. First order | II. $\text{mol}^{-2} \text{L}^2 \text{s}^{-1}$ |
| C. Second order | III. s^{-1} |
| D. Third order | IV. $\text{mol L}^{-1} \text{s}^{-1}$ |

Choose the correct answer from the options given below :

Correct Answer (3)

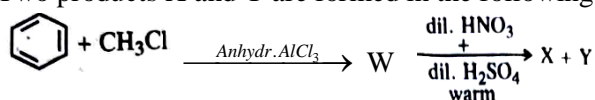
(3) A-IV, B-III, C-I, D-II

57. The calculated 'spin-only' magnetic moment of Ti^{2+} ($3d^2$) is:

Correct Answer (1)

(1) 2.84 BM

58. Two products X and Y are formed in the following reaction sequence.



The suitable method that can be used for the separation of products X and Y is :

Correct Answer (3)

(3) Fractional distillation

59. A bulb is rated at 150 watt, converting 8% energy into light. If energy of one photon is 4.42×10^{-19} J, how many photons are emitted by the bulb per second?

Correct Answer (3)

(3) 2.71×10^{19}

60. In a test tube containing a salt, a few drops of dilute H_2SO_4 was added, which gave colourless vapours having the smell of vinegar. The vapours turned the blue litmus paper red.

Identify the correct anion from the following :

Correct Answer (1)

(1) Acetate, CH_3COO^-

61. Select the reagents that reduce nitriles to primary amines:

- A. (i) LiAlH_4 ; (ii) H_2O
- B. $\text{Sn} + \text{HCl}$
- C. H_2/Ni
- D. $\text{Na(Hg)}/\text{C}_2\text{H}_5\text{OH}$
- E. $\text{Br}_2/\text{aq. NaOH}$

Choose the correct answer from the options given below :

Correct Answer (2)

(2) A, C and D only

62. Identify the incorrect statement from the following:

Correct Answer (3)

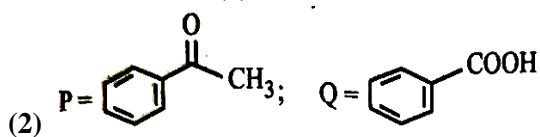
(3) Oxygen exhibits only -2 oxidation state.

63. Although +3 oxidation state is most common in lanthanoids, cerium still shows + 4 oxidation state because:

Correct Answer (4)

(4) After losing one more electron, it acquires $4f^0$ electronic configuration.

64. During Lassaigne's test, the elements present in an organic compound are converted from :
Correct Answer (3)
(3) covalent form to ionic form
65. The number of hydrogen atoms present in 5.4 g of urea is :
 (Given : Molar mass of urea 60 g mol^{-1})
Correct Answer (1)
(1) 2.168×10^{23}
66. The pair of molecules that are metamers among the following is:
Correct Answer (2)
(2) $\text{CH}_3\text{OCH}_2\text{CH}_2\text{CH}_3$ and $\text{CH}_3\text{CH}_2\text{OCH}_2\text{CH}_3$
67. Identify the incorrect statement from the following :
Correct Answer (2)
(2) Nitrogen can form $d\pi\text{-}p\pi$ bond with oxygen.
68. Phenolphthalein is used as an indicator for the titration of sodium hydroxide solution against a standard solution of oxalic acid. The colour change that is observed at an alkaline pH close to the equivalence point during this titration is :
Correct Answer (3)
(3) colourless to pink
69. Match list I with List II :
- | List I | List II |
|---------------------------|------------------------------------|
| A. C_2H_4 | I. 3σ bonds, 2π bonds |
| B. C_2H_2 | II. 3σ bonds, one lone pair |
| C. CH_4 | III. 4σ bonds |
| D. NH_3 | IV. 5σ bonds, 1π bond |
- Choose the correct answer from the options given below :
Correct Answer (1)
(1) A-IV , B-I, C-III, D-II
70. At a certain temperature, T(K), during a process, 500 J is absorbed by the system and work of 200 J is done by the system. Then change in internal energy of the system is :
Correct Answer (2)
(2) 300
71. Methane reacts with steam at 1273 K in the presence of nickel catalyst to form :
Correct Answer (1)
(1) CO and H_2
72. Compound P ($\text{C}_8\text{H}_8\text{O}$) gives a red orange precipitate with 2,4-DNP reagent and it does not reduce Fehling's reagent. On drastic oxidation with chromic acid, P gives an aromatic product Q that produces effervescence on treating with aq. NaHCO_3 . Compounds P and Q, respectively, are :

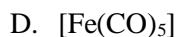
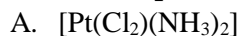


73. A solution of copper sulphate is electrolysed for 10 minutes with a current of 1.5 amperes. The mass of copper deposited at cathode is :
(Given : Molar mass of Cu = 63 g mol⁻¹; 1 F = 96486 C mol⁻¹)
Correct Answer (4)
(4) 0.2938 g
74. The functional group that can be identified through phthalein dye test is :
Correct Answer (1)
(1) Phenolic
75. The correct statement with regard to the secondary structure of DNA/RNA is :
Correct Answer (3)
(3) DNA possesses a double strand helix structure
76. Identify the correct statements:
A. The molality of 2.5 g of ethanoic acid (Molar mass : 60 g mol⁻¹) in 76 g of benzene solution is 0.556 m.
B. The molarity of a solution containing 5g of NaOH (molar mass : 40 g mol⁻¹) in 450 mL of solution is 0.278 M at 298 K.
C. Aquatic species are more comfortable in cold water.
D. The solubility of gas increases with decrease in pressure.
E. For a binary mixture of A and B, the number of moles of A and B are n_A and n_B respectively. The mole fraction of B will be
- $$X_B = \frac{n_B}{n_A + n_B}$$
- Choose the correct answer from the options given below :
Correct Answer (2)
(2) A, B and C only
77. Mixture of chloroform and acetone forms a solution with negative deviation from Raoult's law due to :
Correct Answer (1)
(1) formation of hydrogen bonding between acetone and chloroform .
78. At 298 K, a certain buffer solution contains equal concentration of X⁻ and HX, K_b for X⁻ is 10⁻¹⁰. What is the pH of this buffer solution :
Correct Answer (3)
(3) 4
79. Identify the incorrect statement from the following:
Correct Answer (2)
(2) The largest and the smallest species among Mg, Mg²⁺, Al and Al³⁺ are Al and Mg²⁺, respectively.
80. The correct order of increasing metallic character of Na, Be, P, Mg and Si is :
Correct Answer (1)
(1) P < Si < Be < Mg < Na
81. The correct IUPAC name of the following compound is :

$$\begin{array}{ccccccc} \text{CH}_3 & - & \text{CH}_2 & - & \text{CH} & - & \text{CH}_2 & - & \text{CH} & - & \text{CH}_2 & - & \text{CH}_3 \\ & & & & | & & & & | & & & & \\ & & & & \text{CH}_3 - \text{CH}_2 & & & & \text{CH}_3 & & & & \end{array}$$
Correct Answer (3)
(3) 3-ethyl-5-methylheptane

82. Match List I with List II :

List I (Complex/ion)



List II (Shape/geometry)

I. Octahedral

II. Trigonal bipyramidal

III. Square planar

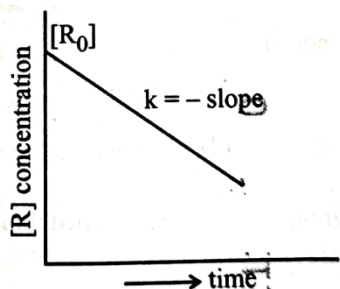
IV. Tetrahedral

Choose the correct answer from the options given below:

Correct Answer (4)

(4) A-III, B-I, C-IV, D-II

83. For a certain reaction $R \rightarrow \text{Product}$, the plot concentration $[R]$ vs time has a negative slope shown. The order of reaction is :



Correct Answer (1)

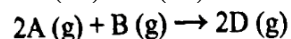
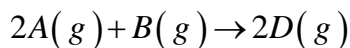
(1) 0

84. Which one of the following is an ambidentate ligand?

Correct Answer (4)

(4) Thiocyanate

85. Consider the following reaction :



$$\Delta U^\ominus = -10 \text{ kJ mol}^{-1} \text{ and } \Delta S^\ominus = -44 \text{ J K}^{-1} \text{ at } 298 \text{ K.}$$

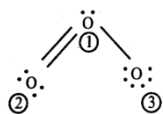
Identify the correct option with ΔG^\ominus for the reaction and spontaneity of the reaction at 298 K.

(Given : $R = 8.31 \text{ J mol}^{-1} \text{ K}^{-1}$)

Correct Answer (2)

(2) $+0.63568 \text{ kJ mol}^{-1}$ non-spontaneous

86.



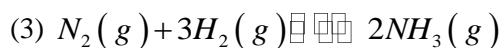
The correct formal charges on oxygen atoms numbered 2, 1, and 3 respectively are :

Correct Answer (2)

(2) 0, +1, -1

87. Given below are certain reactions. Identify the reaction for which $K_p \neq K_c$.

Correct Answer (3)



88. Given below is an expression for the rate constant of a first order reaction occurring at a certain temperature, T(K).

$$\ln k = 14.34 - \frac{1.25 \times 10^4}{T}$$

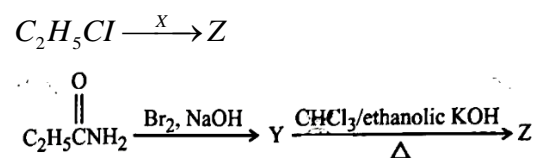
The energy of activation in kcal mol^{-1} for the reaction is :

(Given : k in s^{-1} , $R = 1.987 \text{ cal } mol^{-1} K^{-1}$)

Correct Answer (4)

(4) 24.84

89. The following two reactions give the same foul smelling product Z.



X and Z, respectively, are :

Correct Answer (4)

(4) $X = AgCN$; $Z = C_2H_5NC$

90. Match List I with List II :

List I

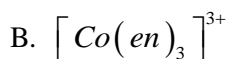
List II

(Complex)

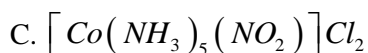
(Type of isomerism)



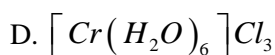
I Optical



II Solvate



III Geometrical



IV Linkage

Choose the correct answer from the options given below:

Correct Answer (3)

(3) A – III, B – I, C – IV, D – II

Biology

91. "The Evil Quartet" of biodiversity loss includes which of the following?

Correct Answer (2)

(2) Habitat loss and fragmentation; over-exploitation; Alien species invasions; Co-extinctions

92. Which one of the following is the site for active ribosomal RNA synthesis ?

Correct Answer (1)

(1) Nucleolus

93. Match List I with List II:

List I

List II

(Phase of cell cycle)

(Activity)

A. G₁ phase

I. Actual cell division occurs

B. S phase

II. Cell is metabolically active and continuously grows but does not replicate its DNA

C. G₂ phase

III. Synthesis of DNA occurs and 'the amount of DNA per cell doubles

D. M phase

IV. Proteins are synthesized while cell growth continues

Choose the correct answer from the options given below:

Correct Answer (1)

(1) A-II, B-III, C-IV, D-I

94. Match List I with List II:

List I

List II

A. Productivity

I. Gross primary productivity minus respiration losses

B. Net primary productivity

II. Rate of formation of new organic matter by consumers

C. Gross primary productivity

III. Rate of biomass production

D. Secondary productivity

IV. Rate of production of organic matter during photosynthesis

Choose the correct answer from the options given below:

Correct Answer (2)

(2) A-III, B-I, C-IV, D-II

95. Which of the following statements are correct?

A . The Amazon rainforest being cut and cleared for cultivation of soyabeans is an example of habitat loss.

- B. Steller's sea cow and passenger pigeon became extinct due to over-exploitation by humans.
- C. The Nile perch introduced into Lake Victoria in East Africa helped in population growth of cichlid fish in the lake.
- D. Water hyacinth is an invasive species.
- E. When a species becomes extinct, the plant and animal species associated with it are not affected.

Choose the correct answer from the options given below:

Correct Answer (2)

(2) A, B and D only

96. Identify the correct statements about biomolecules.

- A. Lipids are generally water soluble.
- B. Proteins are polypeptides.
- C. Polysaccharides are long chains of sugars.
- D. Adenine and guanine are pyrimidines. substituted
- E. Almost all enzymes are proteins.

Choose the correct answer from the options given below:

Correct Answer (2)

(2) B, C and E only

97. How many ATP and NADPH molecules are required to make one molecule of glucose through the Calvin pathway?

Correct Answer (1)

(1) 18 ATP and 12 NADPH

98. Which of the following statements are not true regarding restriction endonucleases?

- A. They are called molecular scissors.
- B. These are the enzymes responsible for restricting the growth of bacteriophages in E. coli.
- C. They cut the DNA only at the centre of the palindromic sites.
- D. They remove nucleotides only from the ends of DNA fragments.
- E. They recognise specific palindromic base-pair sequences.

Choose the answer from the options given below :

Correct Answer (3)

(2) C and D only

99. Match List I with List II:

List I

List II

A. Decomposition

I. Accumulation of dark coloured amorphous colloidal substance

B. Detritus

II. Release of inorganic nutrients by the activity of microbes in soil

C. Mineralisation

III. Breaking down of complex organic matter into inorganic substances

D. Humification

IV. Dead remains of plants and animals including fecal matter

Choose the correct answer from the options given below:

Correct Answer (3)

(3) A-III, B-IV, C-II, D-I

100. In which one of the following, the ovules are not enclosed by an ovary wall and remain exposed ?

Correct Answer (3)

(3) Pinus

101. Match List I with List II:

List I

List II

(Placentation)

(Example)

A. Marginal

I. Mustard

B. Axile

II. Pea

C. Parietal

III. Marigold

D. Basal

IV. Lemon

Choose the correct answer from the options given below:

Correct Answer (3)

(3) A-II, B-IV, C-I, D-III

102. In angiosperms, root hairs arise from which one of the following regions of the root ?

Correct Answer (4)

(4) The region of maturation

103. Which one of the following is *not* a characteristic of plant cells in the phase of elongation ?

Correct Answer (2)

(3) Large conspicuous nuclei

104. Which of the following statements are correct with reference to a transcription unit ?
- A. A transcription unit in DNA is defined primarily by three regions: promoter, structural gene and terminator.
 - B. The promoter is said to be located towards the 5'-end of the structural gene.
 - C. The promoter is a DNA sequence that provides binding site for RNA polymerase.
 - D. The promoter defines the template and coding strands.
 - E. The terminator is located towards the 3'-end of the coding strand and it defines the end of the process of transcription.

Choose the correct answer from the options given below:

Correct Answer (1)

(1) A, B, C, D and E

105. Alpha-helix is found in which level of protein structure ?

Correct Answer (4)

(4) Secondary structure

106. Which of the following statements are correct regarding amino acids ?

- A. They are substituted methanes.
- B. Serine is an aromatic amino acid.
- C. Valine is a neutral amino acid.
- D. Lysine is an acidic amino acid.

Choose the correct answer from the options given below:

Correct Answer (3)

(3) A and C only

107. The main function of bulliform cells in grasses is:

Correct Answer (3)

(3) to minimize water loss during water stress.

108. Find the incorrect statement(s) about photosynthesis from the following:

- A. The water splitting complex is associated with PS I.
- B. C₄ plants use the C₃ pathway of CO₂ fixation as the main biosynthetic pathway.
- C. In C₄ plants, photorespiration does not occur.
- D. C₃ plants exhibit 'Kranz' anatomy.
- E. ATP synthesis in chloroplast occurs through chemiosmosis.

Choose the answer from the options given below:

Correct Answer (2)

(2) A and D only

109. Match List I with List II:

List I

List II

A. Conjunctive tissue

I. Specialised cells in the vicinity of guard cells

B. Casparian strips

II. Endodermal cells rich in starch

C. Subsidiary cells

III. Tissue between xylem and phloem

D. Starch sheath

IV. Endodermal cells with suberin deposition

Choose the correct answer from the options given below:

Correct Answer (3)

(3) A-III, B-IV, C-I, D-II

110. Match List I with List II:

List I

List II

A. Genetically modified organism

I. *Agrobacterium tumefaciens*

B. Thermostable DNA polymerase

II. Bt cotton

C. Ti plasmid

III. *Thermus aquaticus*

D. pBR322

IV. *Escherichia coli*

Choose the correct answer from the options given below:

Correct Answer (3)

(3) A-II, B-III, CD-IV

111. Heterophyllous development in response to environment is an example of which of the following phenomena ?

Correct Answer (4)

(4) Plasticity

112. In racemose inflorescence,

Correct Answer (3)

(3) flowers are borne in an acropetal succession

113. Which one of the following disorders is caused by the substitution of Glutamic acid (Glu) by Valine (Val) at the sixth position of the beta globin chain of the haemoglobin molecule?

Correct Answer

(3) Sickle-cell anaemia

114. Match List I with List II:

List I

List II

- | | |
|--------------------------|--|
| A. Incomplete dominance | I. Human skin colour |
| B. Co-dominance | II. Inheritance of flower colour in <i>Antirrhinum</i> sp. |
| C. Pleiotropy | III. Phenylketonuria disease in humans |
| D. Polygenic inheritance | IV. ABO blood groups |

Choose the correct answer from the options given below:

Correct Answer

(1) A-II, B-IV, C-III, D-I

115. Arrange the following in the correct developmental sequence related to microsporogenesis:

- | | |
|-----------------------|-------------------------------------|
| A. Microspore tetrads | B. Sporogenous tissue |
| C. Pollen grains | D. Pollen mother cells ⁴ |

Choose the correct answer from the options given below:

Correct Answer

(3) B, D, A, C

116. Arrange the following steps of DNA fingerprinting in a correct sequence.

- A. Isolation of DNA and its digestion by restriction endonucleases.
- B. Hybridisation using a labelled VNTR probe.
- C. Transferring of separated DNA fragments to synthetic membranes.
- D. Detection of hybridised DNA fragments by autoradiography.
- E. Separation of DNA fragments by electrophoresis.

Choose the correct answer from the options given below:

Correct Answer (1)

(1) A, E, C, B, D

117. Exploring molecular, genetic and species level diversity for products of economic importance called:

Correct Answer (4)

(4) Bioprospecting

118. Which of the following statements are true with reference to the sex-determination in honeybees?

- A. An offspring formed from the union of a sperm and an egg, develops as a female (queen or worker).
- B. An unfertilized egg develops as a male by parthenogenesis.
- C. A male has half the number of chromosomes than that of a female.
- D. Males produce sperms by meiosis.
- E. Honeybees have a haplodiploid sex-determination system.

Choose the correct answer from the options given below:

Correct Answer (4)

(4) A, B, C and E only

119. Identify the correct sequence of steps in each cycle of Polymerase Chain Reaction:

Correct Answer (1)

(1) Denaturation → Annealing → Extension

120. Which of the following statements are correct with respect to DNA separation, isolation and visualization?

A The cutting of DNA is done by molecular scissors.

B. The DNA fragments separate according to their size in an agarose gel, upon electrophoresis.

C. The separated DNA fragments can be seen without staining when exposed to UV light.

D. The separated DNA fragments, when stained with ethidium bromide, can be seen in visible light.

Choose the correct answer from the options given below:

Correct Answer (4)

(4) A and B only

121. The main criteria used for Five Kingdom Classification proposed by R.H. Whittaker (1969) included:

A. Cell structure

B. Body organization

C. Presence of flagellum

D. Reproduction

E. Phylogenetic relationships

Choose the **correct answer** from the options given below:

Correct Answer (1)

(1) A, B, D and E only

122. Which one of the following is a triploid cell ?

Correct Answer (2)

(2) Primary endosperm cell

123. Which of the following statements are correct with reference to packaging of DNA helix?

A. Histones are organized to form a unit of eight molecules called histone octamer.

B. Histones are negatively charged basic proteins.

C. Histones are rich in the basic amino acid residues - lysine and arginine.

D. The positively charged DNA is wrapped around the histone octamer to form nucleosome.

E. The packaging of chromatin at higher levels requires an additional set of proteins called non-histone chromosomal proteins.

Choose the correct answer from the options given below:

Correct Answer (2)

(2) A, C and E only

124. Which of the following is an in situ conservation method?

Correct Answer (1)

(1) Sacred Groves

125. In the lac operon, the z gene codes for:

Correct Answer (4)

(4) beta-galactosidase

126. Match List I with List II:

List I

List II

(Growth Regulator)

(Function/Effect)

A. 2,4-D

I. Brewing industry

B. GA₃

II. Stimulation of stomatal closure

C. Kinetin

III. Herbicide

D. ABA

IV. Nutrient mobilisation

Choose the correct answer from the options given below:

Correct Answer (3)

(3) A-III, B-I, C-IV, D-II

127. Arrange the following steps of somatic hybridisation in a correct sequence.

A. Digestion of cell walls.

B. Isolation of naked protoplasts.

C. Fusion of protoplasts to get hybrid protoplast.

D. Isolation of single cells from two different varieties of plants.

E. Growing of hybrid protoplast to form a new plant.

Choose the correct answer from the options given below:

Correct Answer (2)

(2) D, A, B, C, E

128. $2(C_{51}H_{98}O_6) + 145O_2 \rightarrow 102CO_2 + 98H_2O + \text{energy}$

The Respiratory Quotient (RQ) of a biomolecule used for respiration, as per the above equation, would be :

Correct Answer (2)

(2) Between 0.5 and 0.95

129. Since the origin and diversification of life on Earth, there have been five episodes of mass extinction of species. How is the sixth extinction, which is in progress, different from the previous episodes?

Correct Answer (2)

(2) The present species extinction rates are 100 to 1000 times faster than in the pre-human times.

130. Match List I with List II:

List I

List II

A. Trypsin

I. Intercellular ground substance

B. Morphine

II. Lectin

C. Concanavalin

III. Enzyme

D. Collagen.

IV. Alkaloid

Choose the correct answer from the options given below:

(1) A-III, B-IV, C-II, D-I

(2) A-I, B-II, C-III, D-IV

(3) A-III, B-II, C-IV, D-I

(4) A-IV, B-III, C-II, D-I

131. Which one of the following statements is not true about the universal rules of binomial nomenclature?

Correct Answer (3)

(3) The first word in the biological name represents the specific epithet, while the second component denotes the genus.

132. The enzyme required for carboxylation in the Calvin cycle is:

Correct Answer (2)

(2) RuBP carboxylase - oxygenase

133. Which of the following floral formula is the correct floral formula of solanaceae family?

Correct Answer (1)

(1) $\oplus \overset{\curvearrowright}{\underset{\curvearrowleft}{\text{K}}_{(5)} \text{C}_{(5)} \text{A}_5 \underline{\text{G}}_{(2)}$

134. Which one of the following types of pollination brings genetically different types of pollen grains to the stigma ?

Correct Answer (3)

(3) Xenogamy

135. Match List I with List I

List I

(Process)

- A. Glycolysis
- B. ETS
- C. Accumulation of protons
- D. Krebs' cycle

List II

(Location)

- I. Inner mitochondrial membrane
- II. Mitochondrial matrix
- III. Cytoplasm
- IV. Intermembrane space

Choose the correct answer from the options given below:

Correct Answer (2)

(2) A-III, B-I, C-IV, D-II

136. Insertion of a foreign DNA at BamHI site in an E.coli cloning vector pBR322 results in the loss of antibiotic resistance towards:

Correct Answer(3)

(3) Tetracycline

137. The sixth mutant codon of beta globin gene causing polymerization of Haemoglobin and change in RBC shape is _____.

Correct Answer (2)

(2) GUG

138. Choose the correct statement regarding GIFT to overcome infertility.

Correct Answer (2)

(2) It is the transfer of an ovum collected from a donor into the fallopian tube of another female who cannot produce ovum but can provide suitable environment for fertilization and development.

139. Which one of the following is an appropriate example of sexual deceit?

Correct Answer (3)

(3) Ophrys and bumblebee

140. Evolution of human appears parallel to the progressive development of brain and language skills. As such, the evolution of individual species in the sequence of their appearance is:

Correct Answer (2)

(2) Ramapithecus → Homo habilis → Homo erectus → Neanderthal → Homo sapiens

141. Match List I with List II related to embryonic development at various months of pregnancy:

| | List-I | | List-II |
|----|--|-------|-----------------------|
| A. | The foetus movement starts and hair appears on the head | (I) | 24 weeks of pregnancy |
| B. | The foetus develops limbs and digits | (II) | 20 weeks of pregnancy |
| C. | The foetus develops external genital organs | (III) | 8 weeks of pregnancy |
| D. | The foetus body is covered with fine hair; eyelids separate and eyelashes are formed | (IV) | 12 weeks of pregnancy |

Choose the correct answer from the options given below:

Correct Answer (4)

(4) A-II, B-III, C-IV, D-I

142. A group of researchers procured some fish like animals and upon investigation the following characters were observed:

A. Endoskeleton was made of cartilage.

B. Ectoparasitic; as they were found attached on fish skin with their circular sucking mouth.

C. Paired fins and scales were absent, but 7 pairs of gill slits were present.

Which of the following species of animals did they consider to fit best with these characters?

Correct Answer (3)

(3) Petromyzon sp.

143. Spermatogonia undergo a series of cell divisions to produce sperms. Select the correct statements from the following :

A. Spermatogonia always undergo meiotic cell division.

B. Primary spermatocytes divide mitotically to produce secondary spermatocytes.

C. Secondary spermatocytes, through their second meiotic division, produce haploid spermatids.

D. Spermatids produce spermatozoa through mitosis.

E. Spermatids transform into spermatozoa by spermiogenesis.

Choose the correct answer from the options given below:

Correct Answer (1)

(1) C and E only

144. What is the probability of having children with 'O' blood group, where both mother and father are heterozygous for 'A' and 'B' blood group, respectively?

Correct Answer (4)

(4) 25%

145. Arrange the following events occurring in Renin-Angiotensin mechanism in the correct order:

A. Increase in blood pressure and Glomerular filtration rate

B. Reabsorption of Na⁺ and water from distal parts of tubule due to Aldosterone

C. Fall in Glomerular filtration rate

D. Vasoconstriction by Angiotensin II and release of Aldosterone.

E. Renin converts Angiotensinogen into Angiotensin I, followed by Angiotensin II.

Choose the correct answer from the options given below:

Correct Answer (4)

(4) C, E, D, B, A

146. Match List-I with List-II.

| | List-I (Respiratory Volume) | | List-II (Capacity in mL) |
|----|--|------|-------------------------------------|
| A. | ERV (Expiratory Reserve Volume) | I. | 2500 – 3000 mL |
| B. | RV (Residual Volume) | II. | 500 mL |
| C. | IRV (Inspiratory Reserve Volume) | III. | 1000 – 1100 mL |
| D. | TV (Tidal Volume) | IV. | 1100 – 1200 mL |

Choose the correct answer from the options given below :

Correct Answer (3)

(3)A-III, B-IV, C-I, D-II

147. Match List I and List II

| | List-I | | List-II |
|----|---------------|-------|--|
| a. | Progestasert | (i) | Barrier made of rubber used by females |
| b. | Multiload 375 | (ii) | Oral contraceptive |
| c. | Diaphragm | (iii) | Hormone releasing IUD |
| d. | Saheli | (iv) | Copper releasing IUD |

Choose the correct answer from the options given below:

Correct Answer (1)

(1)A(III), B(IV), C(I), D(II)

148. Non-membrane bound cell organelles found in both prokaryotic and eukaryotic cells are _____.

Correct Answer (2)

(2)Ribosomes

149. Ecological pyramids represent the relationship between the organisms at different trophic levels and they are generally inverted for:

Correct Answer (2)

(2)Pyramid of biomass in sea

150. The flightless bird with forelimbs modified as paddle-like structures suited for swimming is known as:

Correct Answer (4)

(4)Aptenodytes

151. Match List I with List II:

| | List I (Bioactive molecules) | | List II (Importance) |
|----|------------------------------|------|---|
| A. | Streptokinase | I. | Immunosuppressive agent |
| B. | Statins | II. | Removal of clots from the blood vessels |
| C. | Lipases | III. | Blood cholesterol-lowering agent |
| D | Cyclosporin A | IV | Detergent formulations |

Choose the correct answer from the options given below:

Correct Answer (1)

(1)A–II, B–III, C–IV, D–I

152. Choose the correct statements regarding cell organelles and their inclusions.

- A. The endomembrane system includes Golgi complex, endoplasmic reticulum and mitochondria.
- B. Rough endoplasmic reticulum bears ribosomes on its surface.
- C. Both mitochondria and plastids have circular DNA.
- D. A network of microtubules, microfilaments and intermediate filaments present in the cytoplasm is called cytoskeleton.
- E. Mitochondrion is a single membrane-bound structure.

Choose the correct answer from the options given below

Correct Answer (4)

(4) B, C and D only

153. Select the set of fishes which belong to the class Osteichthyes:

Correct Answer (3)

(3) Flying fish, Angel fish and Fighting fish

154. In a population of a grasshopper species, the chromosome number of some members is 23 and some other members possess 24 chromosomes. The 23 and 24 chromosome-bearing members in this species are _____.

Correct Answer (4)

(4)males and females, respectively

155. The WBC count of a person's blood sample is 8000/Cu mm. How many eosinophils and lymphocytes would be in the same blood sample approximately

Correct Answer (1)

(1)160 – 240/Cu mm and 1600 – 2000/Cu mm respectively

156. The toxin proteins isolated from *Bacillus thuringiensis*, coded by which of the following genes would control cotton bollworms and corn borer, respectively?

Correct Answer (3)

(3)cryIaC and cryIaB

157. Match List I with List II:

| | List I (Drug) | | List II (Effect) |
|----|---------------|------|---|
| A. | Nicotine | I. | Causes sense of euphoria and increased energy |
| B. | Morphine | II. | Stimulates adrenal gland to release catecholamines into blood circulation |
| C. | Heroin | III. | Effective sedative and painkiller |
| D. | Cocaine | IV. | A depressant; slows down body function |

Choose the correct answer from the options given below:

Correct Answer (2) A–II, B–III, C–IV, D–I

158. Match List I with List II related to muscular/skeletal system

| | List I | | List II |
|----|--------------------|-------|--|
| A. | Tetany | (I) | Inflammation of joints |
| B. | Arthritis | (II) | Autoimmune disorder affecting neuromuscular junction |
| C. | Myasthenia gravis | (III) | Wild contraction in muscle due to low Ca ⁺⁺ in body fluid |
| D. | Muscular dystrophy | (IV) | Progressive degeneration of skeletal muscle |

Choose the correct answer from the options given below:

Correct Answer (1)

(1)A-III, B-I, C-II, D-IV

159. In which animal do haploid cells divide mitotically to produce gametes?

Correct Answer (1)

(1)Male honeybees

160. In humans, respiration occurs in the following steps. Arrange these steps in the correct order.

- A. Diffusion of O₂ and CO₂ between blood and tissues
- B. Diffusion of O₂ and CO₂ across alveolar membrane
- C. Pulmonary ventilation by which atmospheric air is drawn in and CO₂ rich alveolar air is released out
- D. Cellular respiration
- E. Transport of gases by the blood

Choose the correct answer from the options given below

Correct Answer (4)

(4)C, B, E, A, D

161. Arrange the following cell layers/structures around the female gamete, from outer to inner side :

- A. Zona pellucida
- B. Perivitelline space
- C. Corona radiata
- D. Plasma membrane of ovum

Choose the correct answer from the options given below :

Correct Answer (2)

(2) C, A, B, D

162. The human protein named α -1-antitrypsin, obtained from transgenic animals, is used for the treatment of _____.

Correct Answer (2)

(2)Emphysema

163. Select the correct statements regarding cell membrane in eukaryotic cell.

- A. Membrane of human RBCs has approximately 52% protein.
- B. Major phospholipids are arranged in a bilayer.
- C. Extensions of the plasma membrane into the cell form mesosomes.
- D. Tails towards the inner part of lipids are hydrophobic and thus protected from aqueous medium.
- E. Glycocalyx is present on the outer surface of the plasma membrane.

Choose the correct answer from the options given below:

Correct Answer (4)

(4)A, B and D only

164. Male frogs can be distinguished from female frogs due to the presence of

- A. Bulging eyes
- B. Vocal sacs
- C. Webbed digits in feet
- D. Copulatory pad on first digit of fore limbs
- E. Olive green-coloured skin with dark irregular spots

Choose the correct answer from the options given below

Correct Answer (1)

(1)B and D only

165. Which of the following equations depicts Verhulst-Pearl logistic population growth?

Correct Answer (1)

(1)
$$\frac{dN}{dt} = rN \left(\frac{K - N}{K} \right)$$

166. Choose the correct statements regarding frog's anatomy:

- A. Hepatic portal system is the special venous connection between liver and intestine.
- B. There are twelve pairs of cranial nerves arising from the brain.
- C. The ureters and oviducts open separately into the cloaca in female frogs.
- D. Hind-brain consists of cerebellum, medulla oblongata and optic lobes.
- E. Sinus venosus joins the Correct atrium of heart.

Choose the correct answer from the options given below:

Correct Answer (2)

(2)A, C and E only

167. Select the incorrect statement with reference to Rh grouping.
- A. Erythroblastosis foetalis is a condition observed having foetus with Rh–ve blood and mother with Rh+ve blood.
 - B. Rh antigen is observed on RBCs in the majority of human beings.
 - C. Before blood transfusion, Rh group should also be matched.
 - D. Rh incompatibility is observed when a pregnant mother is Rh–ve and the foetus is Rh+ve .
 - E. Erythroblastosis foetalis can be avoided by administering anti-Rh antibodies to the mother immediately after the delivery of the second child.

Choose the answer from the options given below :

Correct Answer (1)

(1)A and E only

168. Which of the following statements are correct with reference to human endoskeleton?
- A. Human skull is monocondylic.
 - B. The joint between any two adjoining vertebrae is a cartilaginous joint.
 - C. In human beings, the number of cervical vertebrae is seven.
 - D. All ribs except the last 2 pairs are bicephalic.
 - E. The occipital bone of skull is articulated with atlas vertebra.

Choose the correct answer from the options given below:

Correct Answer (3)

(3)B, C and E only

169. Match List I with List II:

| | List-I | | List-II |
|----|-----------------|------|--|
| a. | Cortisol | I. | Stimulates the formation of alveoli in mammary glands |
| b. | Aldosterone | II. | Produces anti-inflammatory reactions |
| c. | Cholecystokinin | III. | Stimulates reabsorption of Na ⁺ and water from renal tubule |
| d | Progesterone | IV. | Stimulates secretion of pancreatic enzymes and bile juice |

Choose the correct answer from the options given below:

Correct Answer (2)

(2) A-II, B-III, C-IV, D-I

170. The following are the stages of life cycle of Plasmodium. Arrange the stages in the proper order.
- A. The parasites reproduce asexually in RBCs, bursting the cells.
 - B. The parasites reproduce asexually in liver cells, bursting the cells and releasing into blood.
 - C. Gametocytes develop in RBCs.
 - D. Sporozoites reach the liver through the blood.
 - E. Female mosquito injects sporozoites into humans during bite.

Choose the correct answer from the options given below:

Correct Answer (2)

(2) E, D, B, A, C

171. Select the incorrect statements from the following:
- A. Digestive system in Platyhelminthes is incomplete.
 - B. Bilateral symmetry is a characteristic feature of adult Echinoderms.
 - C. Pseudocoelom is possessed by Aschelminthes.
 - D. Notochord is persistent throughout life in the class Chondrichthyes.
 - E. Members of class Reptilia maintain a constant body temperature.

Choose the answer from the options given below:

Correct Answer (1)

(1) B and E only

172. The specific receptors for neurotransmitters in a synapse are present on _____.

Correct Answer (1)

(1) Post-synaptic membrane

173. Choose the correct statements regarding muscle contraction.
- A. A motor neuron carries a signal sent by the Central Nervous System (CNS) to the sarcolemma of the muscle fibre.
 - B. The neural signal generates an action potential which causes the release of Ca^{++} into sarcoplasm.
 - C. Increase in Ca^{++} inactivates the actin for breaking cross bridges.
 - D. Actin binds to the myosin head to form a cross bridge.
 - E. Shortening of sarcomere takes place, by pulling actin filaments towards the centre of 'A' band.

Choose the correct answer from the options given below :

Correct Answer (1)

(1) A, B, D and E only

174. Which of the following is not an example of convergent evolution?

Correct Answer (2)

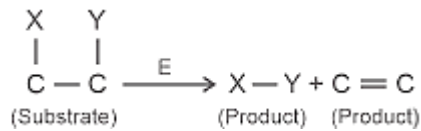
(2) Fore limbs of whales and bats

175. The JGA (Juxta Glomerular Apparatus) is a special sensitive region formed by cellular modifications in _____ related to the same nephron.

Correct Answer (3)

(3) Distal convoluted tubule and afferent renal arteriole

176. The following reaction depicts the activity of a particular class of enzymes :



Identify the enzymes class 'E' from the following options :

Correct Answer (2)

(2) Lyases

177. Match List I with List II:

| | List I | | List II |
|----|------------------|------|-------------------------------------|
| A. | Molluscs | I. | Pulmonary respiration only |
| B. | Reptiles | II. | Branchial respiration |
| C. | Adult amphibians | III. | Cellular respiration |
| D. | Amoeba | IV. | Pulmonary and cutaneous respiration |

Choose the correct answer from the options given below:

Correct Answer (2)

(2) A-II, B-I, C-IV, D-III

178. What is the reason behind production of large holes in 'Swiss Cheese'?

Correct Answer (4)

(4) The production of large amount of CO₂ by Propionibacterium sharmanii

179. Match List I with List II with respect to chronology of evolution of life forms

| | List-I | | List-II |
|----|---------------|-------|---|
| a. | About 65 mya | (i) | Jawless fish probably evolved |
| b. | About 500 mya | (ii) | The dinosaurs suddenly disappeared from the earth |
| c. | About 350 mya | (iii) | Seaweeds and few plants probably existed |
| d. | About 320 mya | (iv) | Invertebrates were formed and became active |

Choose the correct answer from the options given below:

Correct Answer (1)

(1) A(II), B(IV), C(I), D(III)

180. Choose the correct statements regarding population interactions between two species.
- A. In both parasitism and commensalism, only one species benefits and the other species is harmed.
 - B. Both species benefit in mutualism.
 - C. Both species benefit in commensalism.
 - D. In parasitism, only one species benefits and the other species is harmed.
 - E. In amensalism, one species is harmed and the other is unaffected.

Choose the correct answer from the options given below:

Correct Answer (4)

(4) B, D and E only